

**PAPER : CSIR-UGC-NET/JRF Dec. 2015**  
**CHEMICAL SCIENCES BOOKLET-[A]**

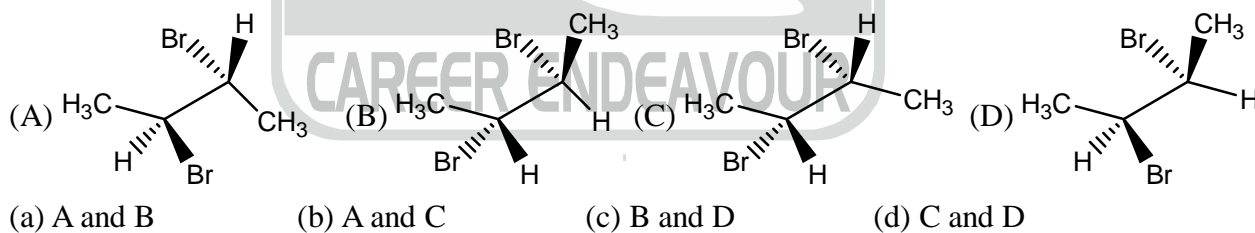
---

---

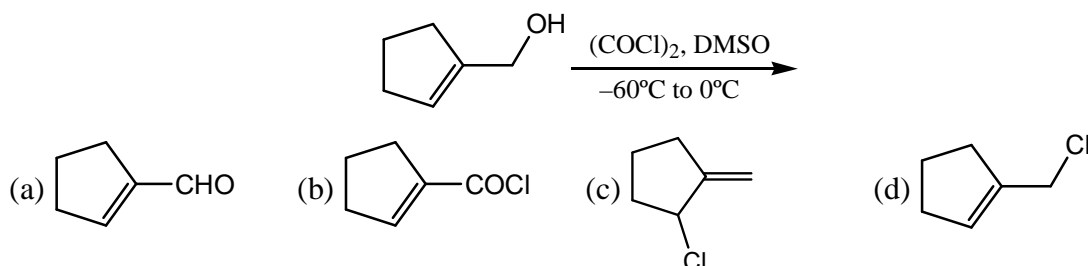
**PART 'B'**

21. The biological functions of cytochrome P<sub>450</sub> and myoglobin are, respectively  
(a) oxidation of alkene and O<sub>2</sub> storage (b) O<sub>2</sub> transport and O<sub>2</sub> storage  
(c) O<sub>2</sub> storage and electron carrier (d) electron carrier and O<sub>2</sub> transport
22. Deoxy-hemocyanin is  
(a) heme protein and paramagnetic (b) colorless and diamagnetic  
(c) O<sub>2</sub> transporter and paramagnetic (d) blue colored and diamagnetic
23. The oxidizing power of [CrO<sub>4</sub>]<sup>2-</sup>, [MnO<sub>4</sub>]<sup>2-</sup>, and [FeO<sub>4</sub>]<sup>2-</sup> follows the order  
(a) [CrO<sub>4</sub>]<sup>2-</sup> < [MnO<sub>4</sub>]<sup>2-</sup> < [FeO<sub>4</sub>]<sup>2-</sup> (b) [FeO<sub>4</sub>]<sup>2-</sup> < [MnO<sub>4</sub>]<sup>2-</sup> < [CrO<sub>4</sub>]<sup>2-</sup>  
(c) [MnO<sub>4</sub>]<sup>2-</sup> < [FeO<sub>4</sub>]<sup>2-</sup> < [CrO<sub>4</sub>]<sup>2-</sup> (d) [CrO<sub>4</sub>]<sup>2-</sup> < [FeO<sub>4</sub>]<sup>2-</sup> < [MnO<sub>4</sub>]<sup>2-</sup>
24. Using crystal field theory, identify from the following complex ions that shows same μ<sub>eff</sub> (spin only) values  
(A) [CoF<sub>6</sub>]<sup>3-</sup> (B) [IrCl<sub>6</sub>]<sup>3-</sup> (C) [Fe(H<sub>2</sub>O)<sub>6</sub>]<sup>2+</sup>  
(a) A and B (b) B and C (c) A and C (d) A, B and C
25. The W-W bond order in [W(η<sup>5</sup>-C<sub>5</sub>H<sub>5</sub>)(μ-Cl)(CO)<sub>2</sub>]<sub>2</sub> is  
(a) three (b) two (c) one (d) zero
26. The correct statement for Mn-O bond lengths in [Mn(H<sub>2</sub>O)<sub>6</sub>]<sup>2+</sup> is  
(a) all bonds are equal  
(b) four bonds are longer than two others  
(c) two bonds are longer than four others  
(d) they are shorter than the Mn-O bond in [MnO<sub>4</sub>]<sup>-</sup>
27. For the reaction of [Fe(η<sup>5</sup>-C<sub>5</sub>H<sub>5</sub>)(CH<sub>3</sub>)(CO)<sub>2</sub>] with PMe<sub>3</sub>, the main intermediate is  
(a) [Fe(η<sup>5</sup>-C<sub>5</sub>H<sub>5</sub>)(CH<sub>3</sub>)(CO)<sub>2</sub>(PMe<sub>3</sub>)] (b) [Fe(η<sup>5</sup>-C<sub>5</sub>H<sub>5</sub>)(COCH<sub>3</sub>)(CO)]  
(c) [Fe(η<sup>3</sup>-C<sub>5</sub>H<sub>5</sub>)(CH<sub>3</sub>)(CO)<sub>2</sub>] (d) [Fe(η<sup>3</sup>-C<sub>5</sub>H<sub>5</sub>)(COCH<sub>3</sub>)(CO)(PMe<sub>3</sub>)]
28. Identify the complex ions in sequential order when ferroin is used as an indicator in the titration of iron(II) with potassium dichromate, (phen = 1, 10-phenanthroline)  
(a) [Fe(phen)<sub>3</sub>]<sup>2+</sup> and [Fe(phen)<sub>3</sub>]<sup>3+</sup> (b) [Fe(phen)<sub>3</sub>]<sup>3+</sup> and [Fe(phen)<sub>3</sub>]<sup>2+</sup>  
(c) [Fe(CN)<sub>6</sub>]<sup>4-</sup> and [Fe(CN)<sub>6</sub>]<sup>3-</sup> (d) [Fe(CN)<sub>6</sub>]<sup>3-</sup> and [Fe(CN)<sub>6</sub>]<sup>4-</sup>
29. The structures of XeF<sub>2</sub> and XeO<sub>2</sub>F<sub>2</sub> respectively are  
(a) bent, tetrahedral (b) linear, square planar  
(c) linear, see-saw (d) bent, see-saw
- 
-

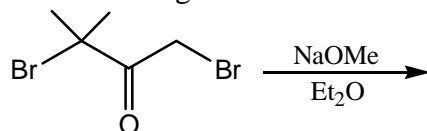
30. Spin motion of which of the following gives magnetic moment  
 (A) electron, (B) proton (C) neutron  
 Correct answer is  
 (a) A and B (b) B and C (c) A and C (d) A, B and C
31. Correct statement for coulometry is  
 (a) it is based on Faraday's law of electrolysis (b) it is a type of voltammetry  
 (c) it is based on Ohm's law (d) it uses ion selective electrode
32. The order of increasing Bronsted acidity for boron hydrides is  
 (a)  $B_5H_9 < B_6H_{10} < B_{10}H_{14}$  (b)  $B_{10}H_{14} < B_5H_9 < B_6H_{10}$   
 (c)  $B_6H_{10} < B_{10}H_{14} < B_5H_9$  (d)  $B_{10}H_{14} < B_6H_{10} < B_5H_9$
33. Among the following, species expected to show fluxional behaviour are  
 (A)  $[NiCl_4]^{2-}$  (tetrahedral) (B)  $IF_7$  (pentagonal bipyramidal)  
 (C)  $[CoF_6]^{3-}$  (octahedral) (D)  $Fe(CO)_5$  (trigonal bipyramidal)  
 (a) B and C (b) B and D (c) C and D (d) A and D
34. The ring size and the number of linked tetrahedral present in  $[Si_6O_{18}]^{12-}$  are, respectively  
 (a) 6 and 6 (b) 12 and 6 (c) 12 and 12 (d) 6 and 12
35. The molecule  $C_3O_2$  has a linear structure. This compound has  
 (a)  $4\sigma$  and  $4\pi$  bonds. (b)  $3\sigma$  and  $2\pi$  bonds  
 (c)  $2\sigma$  and  $3\pi$  bonds (d)  $3\sigma$  and  $4\pi$  bonds.
36. The metallic radii are abnormally high for which of the following pairs?  
 (a) Eu, Yb (b) Sm, Tm (c) Gd, Lu (d) Nd, Ho
37. Identify two enantiomers among the following compounds

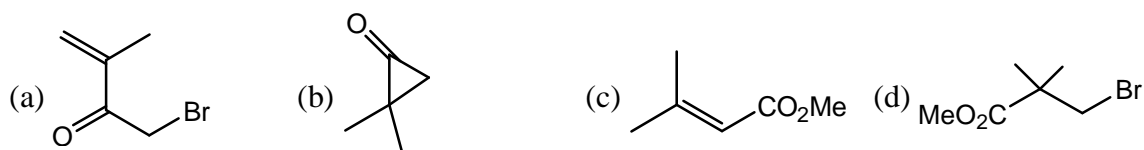


38. The major product formed in the following reaction is

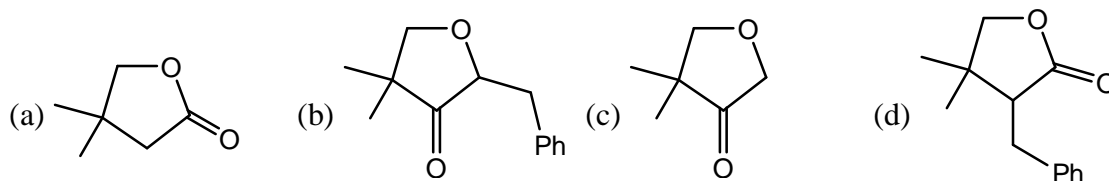
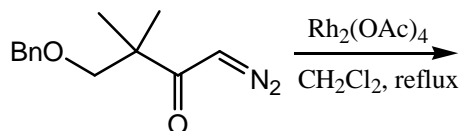


39. The major product formed in the following reaction is

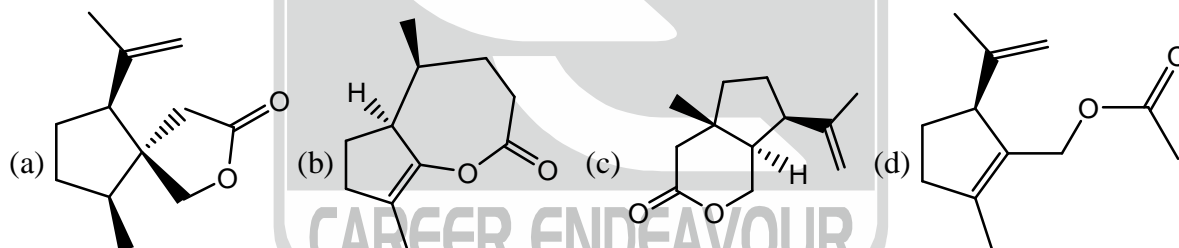
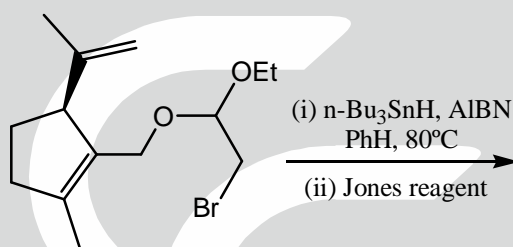




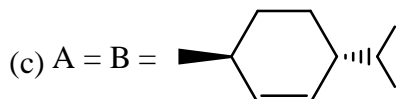
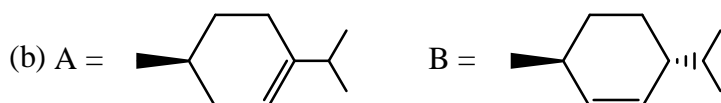
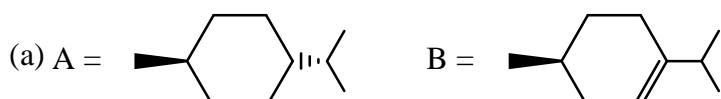
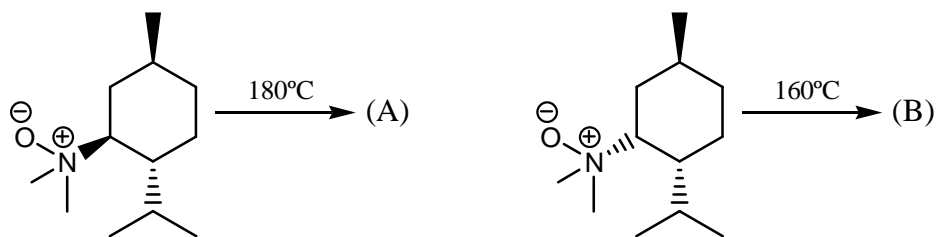
40. The major product formed in the following reaction is

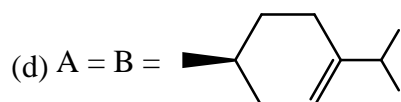


41. The major product formed in the following reaction is

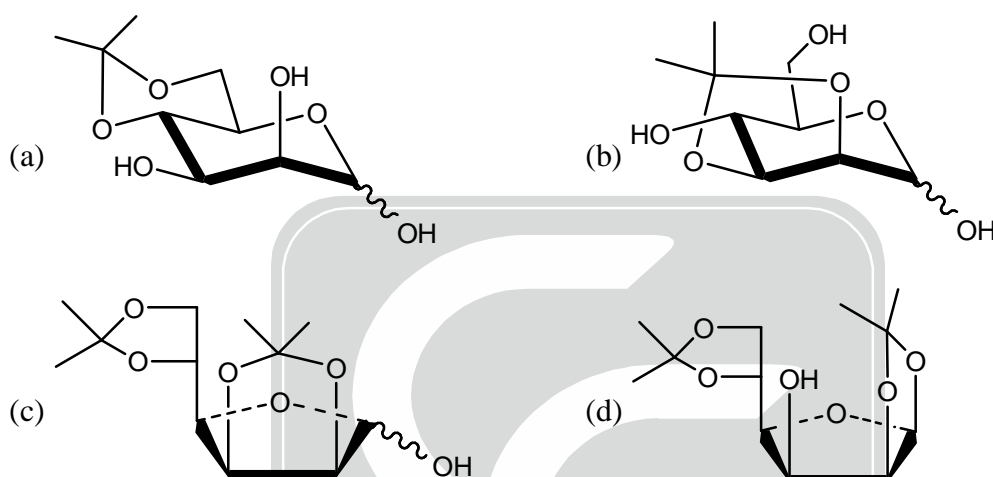
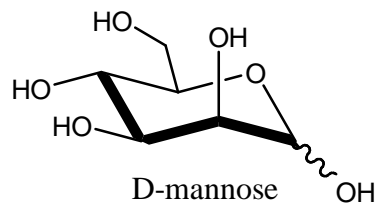


42. The major product A and B in the following reactions are

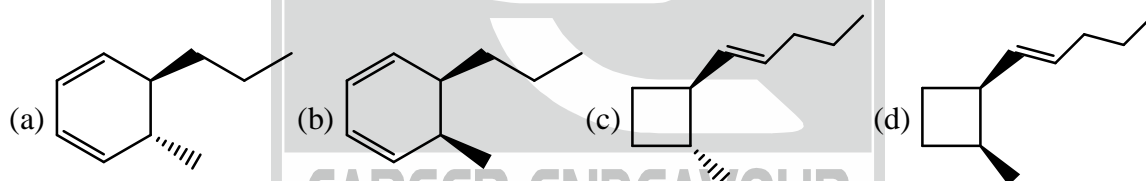




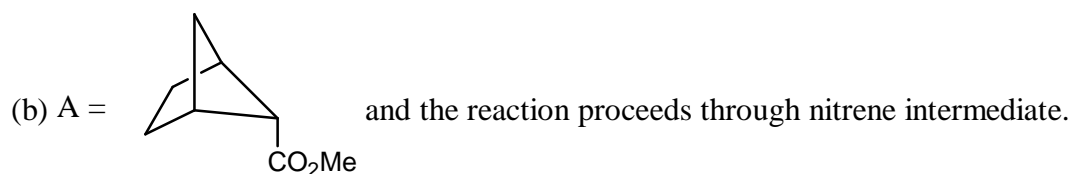
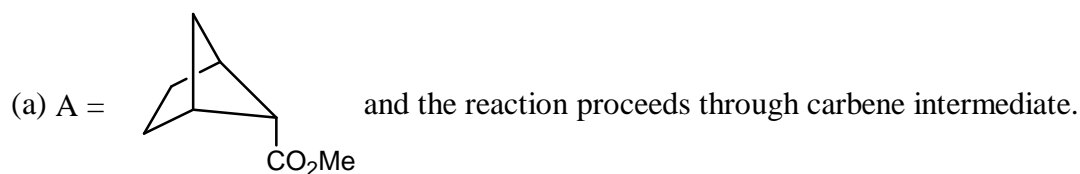
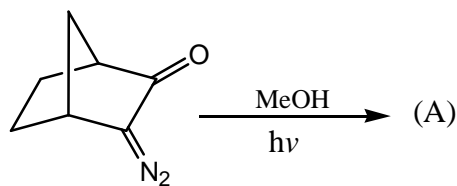
43. D-Mannose upon refluxing in acetone with  $\text{CuSO}_4$  and  $\text{H}_2\text{SO}_4$  gives

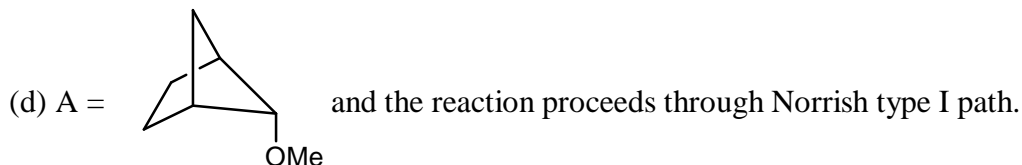
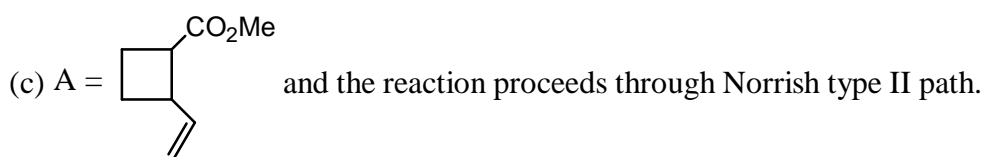


44. The major product formed by photochemical reaction of (2E, 4Z, 6E)-decatriene is

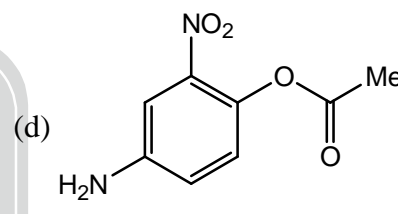
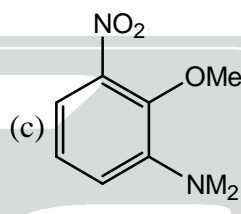
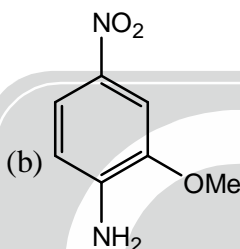
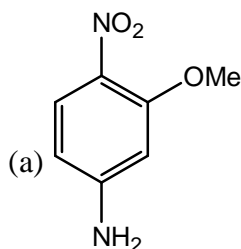


45. The correct statement about the following reaction is that

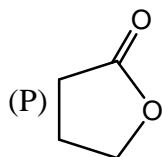




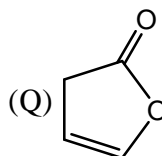
46. The structure of the compounds that matches the  $^1\text{H NMR}$  data given below is  
 $^1\text{H NMR}$  (DMSO- $d_6$ ):  $\delta$  7.75 (dd,  $J = 8.8, 2.4$  Hz, 1H), 7.58 (d,  $J = 2.4$  Hz, 1H), 6.70 (d,  $J = 8.8$  Hz, 1H), 6.50 (broad s, 2H), 3.80 (s, 3H).



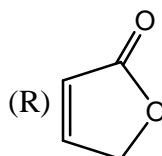
47. Correctly matched structure and carbonyl stretching frequency set is



(X)  $1750\text{ cm}^{-1}$



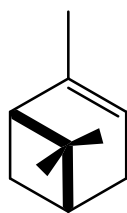
(Y)  $1770\text{ cm}^{-1}$



(Z)  $1800\text{ cm}^{-1}$

- (a) P-Y, Q-Z, R-X    (b) P-Y, Q-X, R-Z    (c) P-Z, Q-Y, R-X    (d) P-X, Q-Z, R-Y

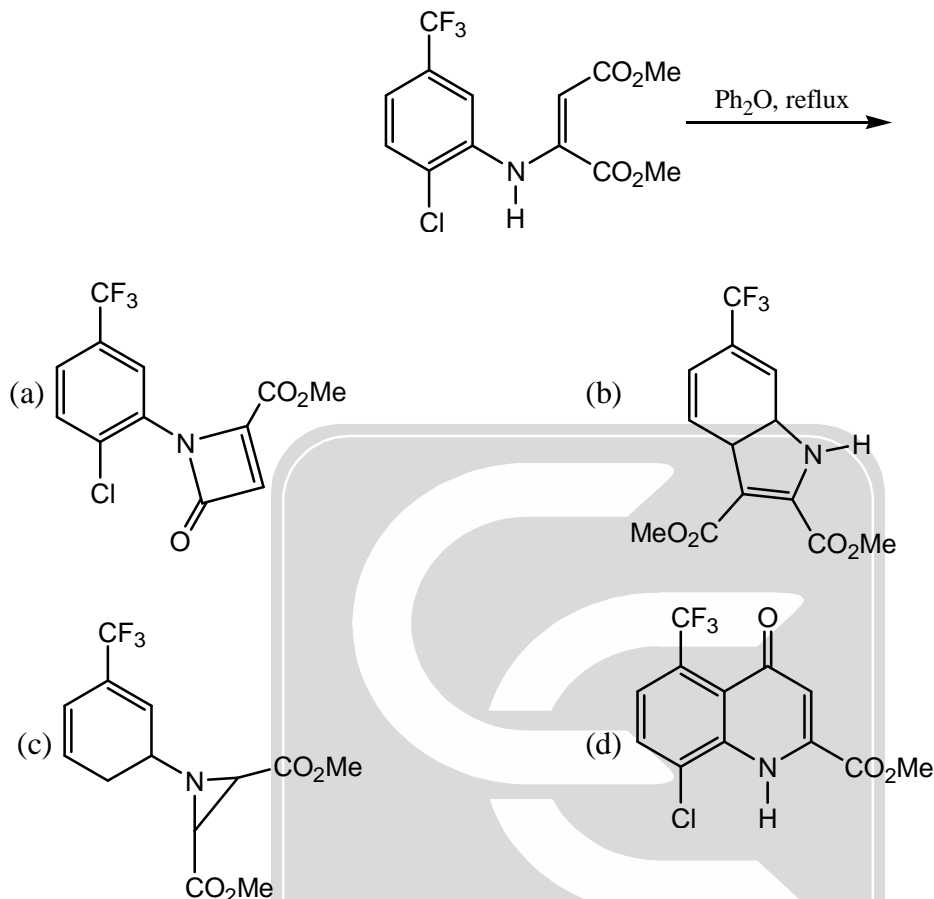
48. The number of chemical shift non-equivalent protons expected in  $^1\text{H NMR}$  spectrum of  $\alpha$ -pinene is



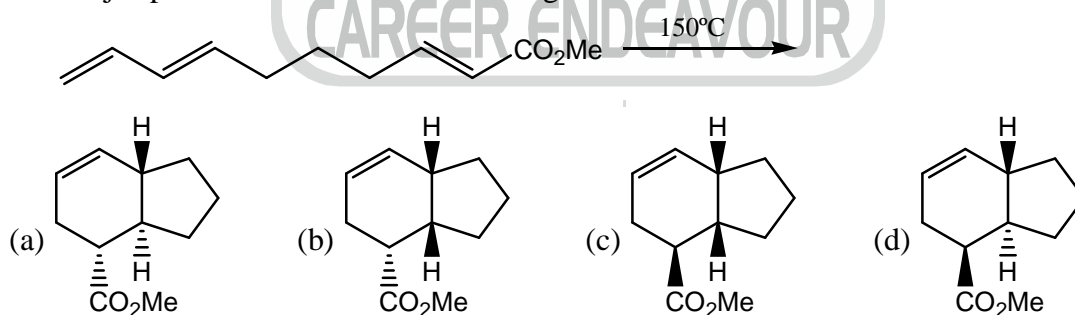
$\alpha$ -pinene

- (a) 7                      (b) 8                      (c) 9                      (d) 10

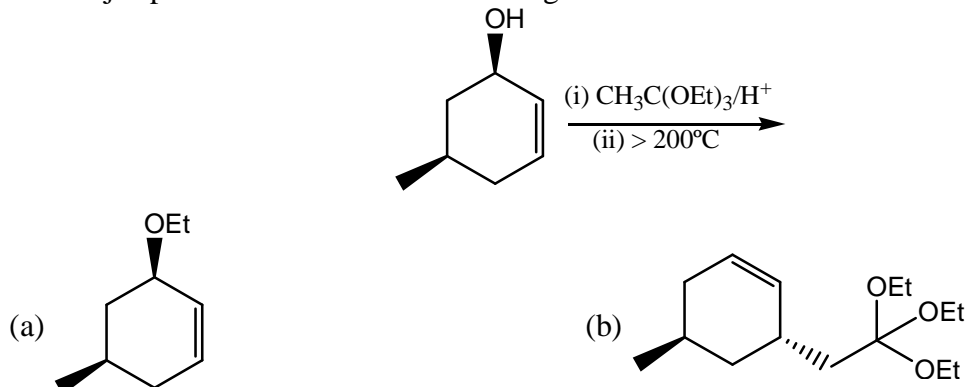
49. In the mass spectrum of 1, 2-dichloroethane, approximate ratio of peaks at  $m/z$  values 98, 100, 102 will be  
 (a) 3 : 1 : 1                      (b) 9 : 6 : 1                      (c) 1 : 1 : 2                      (d) 1 : 2 : 1
50. The major product formed in the following reaction is

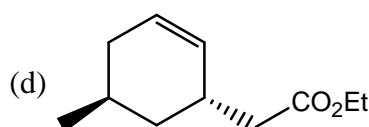
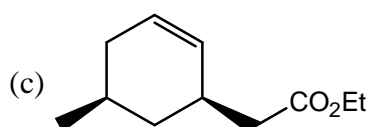


51. The major product formed in the following reaction is

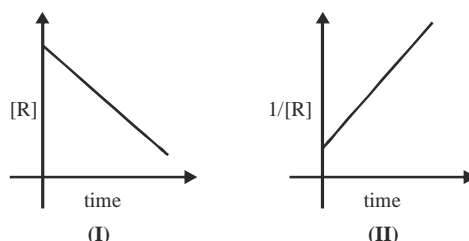


52. The major product formed in the following reaction is





53. The concentration of a reactant R varies with time for two different reactions as shown in the following plots :



The orders of these two reactions I and II, respectively are

- (a) zero and one      (b) one and zero      (c) zero and two      (d) two and zero
54. For a simple cubic crystal lattice, the angle between the  $[2\ 0\ 1]$  plane and the  $xy$  plane is  
 (a) less than  $30^\circ$       (b) between  $30^\circ$  and  $45^\circ$       (c) between  $45^\circ$  and  $60^\circ$       (d) greater than  $60^\circ$
55. For the following reaction,  

$$A \xrightleftharpoons[k_{-1}]{k_1} 2B; \quad B \xrightarrow{k_2} C$$

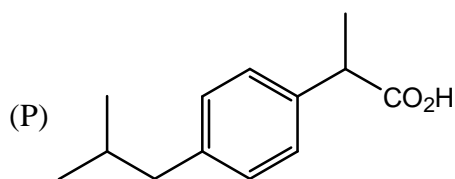
$$\frac{d[B]}{dt}$$
 is given by  
 (a)  $k_1[A] - k_{-1}[B]^2 - 2k_2[B]$       (b)  $2k_1[A] - k_{-1}[B]^2 - k_2[B]$   
 (c)  $\frac{1}{2}k_1[A] - \frac{1}{2}k_{-1}[B]^2 - k_2[B]$       (d)  $2k_1[A] - 2k_{-1}[B]^{1/2} - k_2[B]$
56. If the reduced mass of a diatomic molecule is doubled without changing its force constant, the vibrational frequency of the molecule will be  
 (a)  $\sqrt{2}$  times the original frequency      (b)  $\frac{1}{\sqrt{2}}$  times the vibrational frequency  
 (c) twice the original frequency      (d) unchanged
57. The standard deviation of speed ( $\sigma_c$ ) for Maxwell's distribution satisfies the relation  
 (a)  $\sigma_c \propto T$       (b)  $\sigma_c \propto \sqrt{T}$       (c)  $\sigma_c \propto 1/T$       (d)  $\sigma_c \propto 1/\sqrt{T}$
58. The value of  $\Delta U - \Delta H$  for the reaction  $\text{Fe}_2\text{O}_3(s) + 3\text{C}(s) \longrightarrow 2\text{Fe}(s) + 3\text{CO}(g)$  is  
 (a)  $-3RT$       (b)  $+3RT$       (c)  $+RT$       (d)  $-RT$
59. If the pressure  $p(\text{system})$  is greater than the  $p(\text{surroundings})$ , then  
 (a) work is done on the system by the surroundings  
 (b) work is done on the surroundings by the system  
 (c) work done on the system by the surroundings is equal to the work done on the surroundings by the system  
 (d) internal energy of the system increases



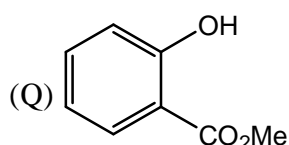
60. Two different non-zero operators  $\hat{A}$  and  $\hat{B}$  ( $\hat{A} \neq \hat{B}$ ) satisfy the relation  $(\hat{A} + \hat{B})(\hat{A} - \hat{B}) = \hat{A}^2 - \hat{B}^2$
- (a)  $\hat{A}\hat{B} = \hat{A}^2$  and  $\hat{B}\hat{A} = \hat{B}^2$  (b)  $\hat{A}\hat{B} + \hat{B}\hat{A} = 0$   
 (c)  $\hat{A}$  and  $\hat{B}$  are arbitrary (d)  $\hat{A}\hat{B} - \hat{B}\hat{A} = 0$
61. The degeneracy of an excited state of a particle in 3-dimensional cubic box with energy 3 times its ground state energy is
- (a) 3 (b) 2 (c) 1 (d) 4
62.  $\Delta H$  of a reaction is equal to slope of the plot of
- (a)  $\Delta G$  versus  $(1/T)$  (b)  $\Delta G$  versus  $T$   
 (c)  $(\Delta G/T)$  versus  $T$  (d)  $(\Delta G/T)$  versus  $(1/T)$
63. The correct form for a simple Langmuir isotherm is
- (a)  $\theta = Kp$  (b)  $\theta = (Kp)^{1/2}$  (c)  $\theta = Kp/(1 + Kp)$  (d)  $\theta = (1 + Kp)/Kp$
64. In Kohlrausch law,  $\Lambda_m = \Lambda_m^0 - \kappa\sqrt{c}$ ,  $\Lambda_m^0$  and  $\kappa$
- (a) depend only on stoichiometry  
 (b) depend only on specific identify of the electrolyte  
 (c) are independent of specific identify of the electrolyte  
 (d) are mainly dependent on specific identity of the electrolyte and stoichiometry, respectively
65. The correct expression for the product  $((\bar{M}_n) \cdot (\bar{M}_w))$  [ $\bar{M}_n$  and  $\bar{M}_w$  are the number-average and weight average molar masses, respectively, of a polymer] is
- (a)  $N^{-1}\sum_i N_i M_i$  (b)  $N^{-1}\sum_i N_i M_i^2$  (c)  $N / \sum_i N_i M_i$  (d)  $N / \sum_i N_i M_i^2$
66. The concentration of a  $MgSO_4$  solution having the same ionic strength as that of a 0.1 M  $Na_2SO_4$  solution is
- (a) 0.05 M (b) 0.067 M (c) 0.075 M (d) 0.133 M
67.  $sp$  hybrid orbitals are of the form  $C_1 2s + C_2 2p_z$  ( $2s$  and  $2p_z$  are normalised individually). The coefficients of the normalized form for the above  $sp$  hybrid orbitals are
- (a)  $C_1 = \frac{1}{\sqrt{2}}, C_2 = \pm \frac{1}{\sqrt{2}}$  (b)  $C_1 = \frac{1}{2}, C_2 = \pm \frac{1}{2}$   
 (c)  $C_1 = \frac{1}{\sqrt{2}}, C_2 = \pm \frac{1}{2}$  (d)  $C_1 = \frac{1}{2}, C_2 = \pm \frac{1}{\sqrt{2}}$
68. The correct statement among the following is
- (a)  $N_2$  has higher bond order than  $N_2^+$  and hence has larger bond length compared to  $N_2^+$ .  
 (b)  $N_2^+$  has higher bond order than  $N_2$  and hence has larger bond length compared to  $N_2$ .  
 (c)  $N_2$  has higher bond order than  $N_2^+$  and hence has higher dissociation energy compared to  $N_2^+$ .  
 (d)  $N_2$  has lower bond order than  $N_2^+$  and hence has lower dissociation energy compared to  $N_2^+$  energy.
69. The formation constant for the complexation of  $M^+$  ( $M = Li, Na, K$  and  $Cs$ ) with cryptand, C222 follows the order
- (a)  $Li^+ < Cs^+ < Na^+ < K^+$  (b)  $Li^+ < Na^+ < K^+ < Cs^+$   
 (c)  $K^+ < Cs^+ < Li^+ < Na^+$  (d)  $Cs^+ < K^+ < Li^+ < Na^+$



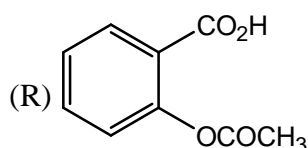
70. The correct match for the compounds in **column A** with the description in **column B** is



(X) Oil of Wintergreen



(Y) Aspirin



(Z) Ibuprofen

- (a) P-Y, Q-Z, R-X    (b) P-Z, Q-X, R-Y    (c) P-Z, Q-Y, R-X    (d) P-X, Q-Z, R-Y

### PART-C

71. The resonance Raman stretching frequency ( $\nu_{O-O}$ , in  $cm^{-1}$ ) of  $O_2$  is 1580. The  $\nu_{O-O}$  for  $O_2$  in bound oxy-hemoglobin is close to
- (a) 1600    (b) 1900    (c) 800    (d) 1100

72. Match the metalloprotein in **Column-A** with its biological function and metal centre in **Column-B**.

- Column-A**  
 (A) hemoglobin  
 (B) cytochrome b  
 (C) vitamin  $B_{12}$   
 (D) hemocyanin

- Column-B**  
 (I) electron carrier and iron  
 (II) electron carrier and copper  
 (III)  $O_2$  transport and copper  
 (IV) Group transfer reactions and cobalt  
 (V)  $O_2$  storage and cobalt  
 (VI)  $O_2$  transport and iron

The correct match is

- (a) A-VI, B-I, C-IV and D-III    (b) A-V, B-I, C-IV and D-III  
 (c) A-VI, B-V, C-I and D-II    (d) A-V, B-VI, C-II and D-IV

73. Pick the correct statements about Atomic Absorption Spectrometry (AAS) from the following
- (A) Hg lamp is not a suitable source for AAS  
 (B) Graphite furnace is the best atomizer for AAS  
 (C) Non-metals cannot be determined with AAS  
 (d) AAS is better than ICP-AES for simultaneous determination of metal ions.

Correct answer is

- (a) A, B and C    (b) B, C and D    (c) C, D and A    (d) D, A and B

74. Identify radioactive capture from the following nuclear reactions

- (a)  ${}^9\text{Be}(\gamma, n){}^8\text{Be}$     (b)  ${}^{23}\text{Na}(n, \gamma){}^{24}\text{Na}$   
 (c)  ${}^{63}\text{Cu}(p, p 3n 9\alpha){}^{24}\text{Na}$     (d)  ${}^{107}\text{Ag}(n, n){}^{107}\text{Ag}$

75. The calibration curve in spectrofluorimetric analysis becomes non-linear when

- (a) molecular weight of analyte is high    (b) intensity of light source is high  
 (c) concentration of analyte is high    (d) molar absorptivity of analyte is high

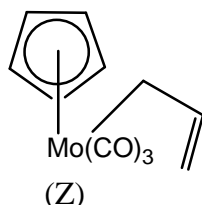


76.  $[\text{MnO}_4]^-$  is deep purple in color whereas  $[\text{ReO}_4]^-$  is colorless. This is due to greater energy required for  
 (a) d-d transitions in the Re compound compared to the Mn compound  
 (b) d-d transitions in the Mn compound compared to the Re compound  
 (c) charge transfer from O to Re compared to O to Mn  
 (d) charge transfer from O to Mn compared to O to Re
77.  $\left[ (\eta^3 - \text{C}_3\text{H}_5) \text{Mn}(\text{CO})_4 \right]$  shows fluxional behavior. The  $^1\text{H}$  NMR spectrum of this compound when it is in the non-fluxional state shows  
 (a) one signal  
 (b) two signals in the intensity ratio of 4 : 1  
 (c) three signals in the intensity ratio of 2 : 2 : 1  
 (d) five signals of equal intensity.
78. The number of lone pair(s) of electrons on the central atom in  $[\text{BrF}_4]^-$ ,  $\text{XeF}_6$  and  $[\text{SbCl}_6]^{3-}$  are, respectively  
 (a) 2, 0 and 1 (b) 1, 0 and 0 (c) 2, 1 and 1 (d) 2, 1 and 0
79. Consider the following reaction :  

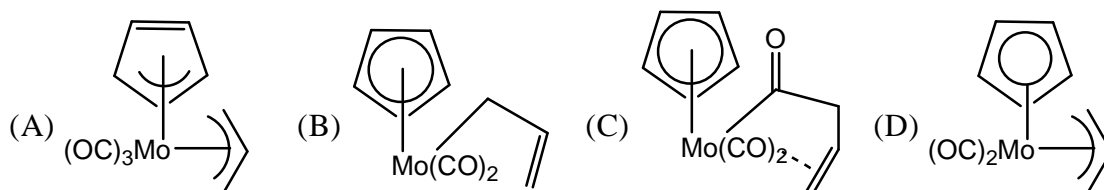
$$\text{N}_3\text{P}_3\text{Cl}_6 + 6\text{HNMe}_2 \rightarrow \text{N}_3\text{P}_3\text{Cl}_3(\text{NMe}_2)_3 + 3$$
 [A]  
 $\text{Me}_2\text{NH}\cdot\text{HCl}$   
 The number of possible isomers for [A] is  
 (a) 4 (b) 3 (c) 2 (d) 5
80. Using Wade's rules predict the structure type of  $[\text{C}_2\text{B}_5\text{H}_7]$   
 (a) nido (b) closos (c) arachno (d) hypho
81. Among the following complexes  
 (A)  $[\text{Co}(\text{ox})_3]^{3-}$   
 (B)  $\text{trans} - [\text{CoCl}_2(\text{en})_2]^+$   
 (C)  $[\text{Cr}(\text{EDTA})]^-$  the chiral one(s) is/are  
 (a) A and B (b) C and B (c) C only (d) A and C
82. Mössbauer spectrum of a metal complex gives information about  
 (A) oxidation state and spin state of metal  
 (B) types of ligands coordinated to metal  
 (C) nuclear spin state of metal  
 (D) geometrey of metal  
 Correct answer is  
 (a) A and C (b) B and C (c) A, B and D (d) B and D
83. For uranocene, the correct statement(s) is/are  
 (A) oxidation state of uranium is '+4'  
 (B) it has cyclooctatetraenide ligands  
 (C) it is bent sandwich compound  
 (D) it has '-2' charge  
 Correct answer is  
 (a) A and B (b) B and C (c) A and D (d) B only

84. The final products of the reaction of carbonyl metalates  $[\text{V}(\text{CO})_6]^-$  and  $[\text{Co}(\text{CO})_4]^-$  with  $\text{H}_3\text{PO}_4$ , respectively, are
- (a)  $\text{V}(\text{CO})_6$  and  $\text{HCo}(\text{CO})_4$                       (b)  $\text{HV}(\text{CO})_6$  and  $\text{Co}_2(\text{CO})_8$   
 (c)  $[\text{H}_2\text{V}(\text{CO})_6]^+$  and  $\text{HCo}(\text{CO})_4$                       (d)  $\text{V}(\text{CO})_6$  and  $\text{Co}_2(\text{CO})_8$
85. The correct statement about the substitution reaction of  $[\text{Co}(\text{CN})_5\text{Cl}]^{3-}$  with  $\text{OH}^-$  to give  $[\text{Co}(\text{CN})_5(\text{OH})]^{3-}$  is,
- (a) it obeys first order kinetics  
 (b) its rate is proportional to the concentration of both the the reactants  
 (c) it follows the  $\text{S}_{\text{N}}^1\text{CB}$  mechanism  
 (d) its rate is dependent only on the concentration of  $[\text{OH}^-]$
86. Aqueous  $\text{Cr}^{2+}$  effects one electron reduction of  $[\text{Co}(\text{NH}_3)_5\text{Cl}]^{2+}$  giving compound Y. Compound Y undergoes rapid hydrolysis. Y is ,
- (a)  $[\text{Co}(\text{NH}_3)_5]^{2+}$                       (b)  $[\text{Co}(\text{NH}_3)_5(\text{OH})]^+$   
 (c)  $[\text{Co}(\text{NH}_3)_4(\text{OH})_2]$                       (d)  $[\text{Cr}(\text{H}_2\text{O})_5\text{Cl}]^{2+}$
87. The reaction of  $\text{BCl}_3$  with  $\text{NH}_4\text{Cl}$  gives product A which upon reduction by  $\text{NaBH}_4$  gives product B. Product B upon reacting with  $\text{HCl}$  affords compound C, which is
- (a)  $\text{Cl}_3\text{B}_3\text{N}_3\text{H}_9$                       (b)  $[\text{ClBNH}]_3$   
 (c)  $[\text{HBNH}]_3$                       (d)  $(\text{ClH})_3\text{B}_3\text{N}_3(\text{ClH})_3$
88. The number of valence electrons provided by  $[\text{Ru}(\text{CO})_3]$  fragment towards cluster bonding is
- (a) 1                      (b) 14                      (c) 6                      (d) 2
89. Choose the correct statements about Tanabe-Sugano diagrams
- (A) E/B is plotted against  $\Delta_0 / B$   
 (B) The zero energy is taken as that of the lowest term  
 (C) Terms of the same symmetry cross each other  
 (D) Two terms of the same symmetry upon increases of ligand field strength bend apart from each other.
- Correct answer is
- (a) A and B                      (b) A and C                      (c) A, B and D                      (d) A, B, C and D
90. Which of the following statements are TRUE for the lanthanides?
- (A) the observed magnetic moment of  $\text{Eu}^{3+}$  at room temperature is higher than that calculated from spin-orbit coupling  
 (B) Lanthanide oxides are predominantly acidic in nature  
 (C) The stability of  $\text{Sm}(\text{II})$  is due to its half-filled sub-shell.  
 (D) Lanthanide (III) ions can be separated by ion exchange chromatography
- Correct answer is
- (a) A and D                      (b) A and B                      (c) A and C                      (d) B and C

91. The intermediate and the final major product of photolysis of **Z**.

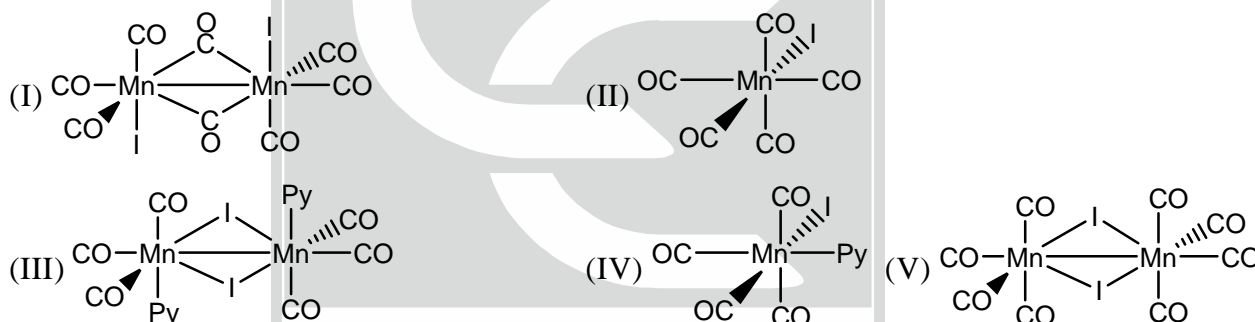


From the following:



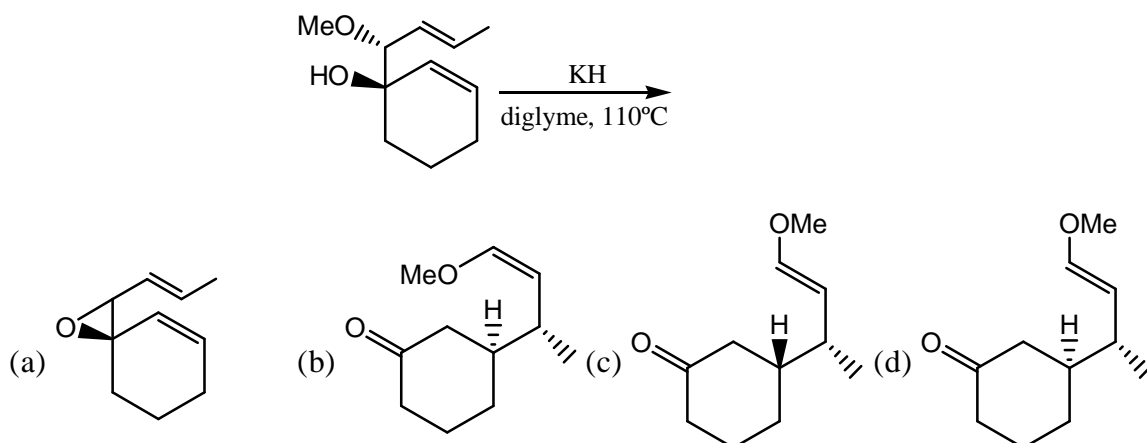
are

- (a) A and D                      (b) B and D                      (c) B and C                      (d) A and C
92. Reaction of  $[\text{Mn}_2(\text{CO})_{10}]$  with  $\text{I}_2$  results in A without loss of CO. Compound A, on heating at  $120^\circ\text{C}$  loses a CO ligand to give B, which does not have a Mn–Mn bond. Compound B reacts with pyridine to give 2 equivalents of C. Compounds A, B and C from the following respectively, are

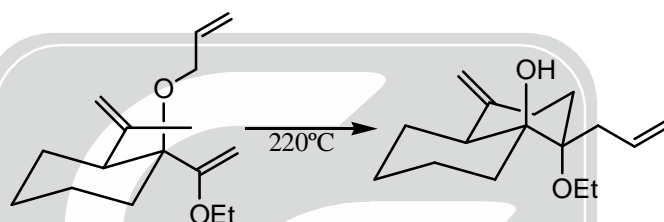


- (a) II, V and IV                      (b) II, III and IV                      (c) V, III and IV                      (d) II, V and III
93. The approximate positions of  $\nu_{\text{CO}}$  bands ( $\text{cm}^{-1}$ ) in the solid-state infrared spectrum and the Fe–Fe bond order in  $[\text{Fe}(\eta^5\text{-C}_5\text{H}_5)(\mu\text{-CO})(\text{CO})]_2$  (non-centrosymmetric) respectively, are
- (a) (2020, 1980, 1800) and one                      (b) (2020, 1980, 1800) and two  
(c) (2020, 1980) and one                      (d) (2143) and one
94. Protonated form of ZSM-5 catalyzes the reaction of ethene with benzene to produce ethylbenzene. The correct statement for this catalytic process is
- (a) alkyl carbocation is formed                      (b) carbanion is formed  
(c) benzene is converted to  $(\text{C}_6\text{H}_5)^+$  group                      (d) vinyl radical is formed
95. Three electronic transitions at  $14900$ ,  $22700$  and  $34400 \text{ cm}^{-1}$  are observed in the absorption spectrum of  $[\text{CrF}_6]^{3-}$ . The  $\Delta_0$  value (in  $\text{cm}^{-1}$ ) and the corresponding transition are
- (a)  $7800$  and  ${}^4\text{A}_{2g} \rightarrow {}^4\text{T}_{2g}$                       (b)  $14900$  and  ${}^4\text{A}_{2g} \rightarrow {}^4\text{T}_{2g}$   
(c)  $14900$  and  ${}^4\text{T}_{2g} \rightarrow {}^4\text{T}_{1g}(\text{F})$                       (d)  $7800$  and  ${}^4\text{T}_{2g} \rightarrow {}^4\text{T}_{1g}(\text{F})$

96. The major product formed in the following reaction is

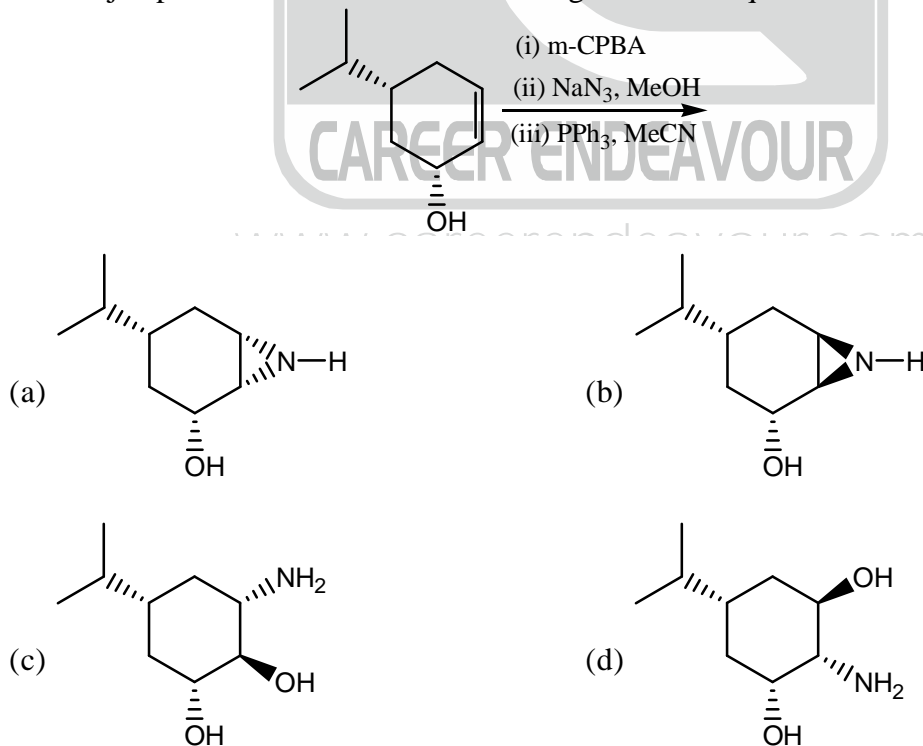


97. The following transformation involves sequential

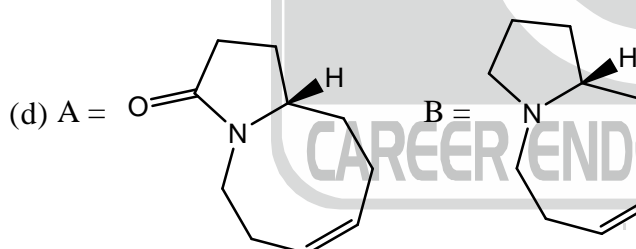
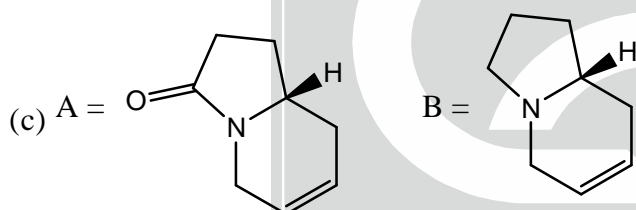
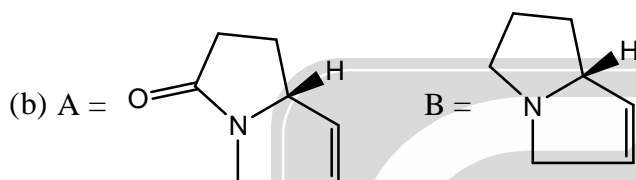
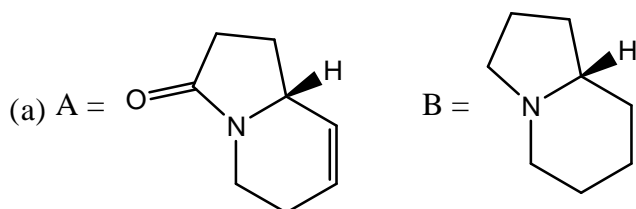
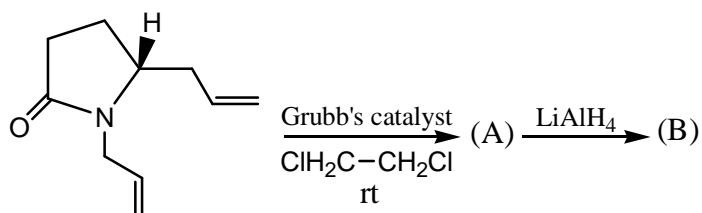


- (a) Claisen rearrangement - Cope rearrangement - ene reaction  
 (b) Cope rearrangement - Claisen rearrangement - ene reaction  
 (c) Cope rearrangement - ene reaction - Claisen rearrangement.  
 (d) ene reaction - Claisen rearrangement - Cope rearrangement.

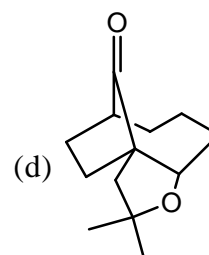
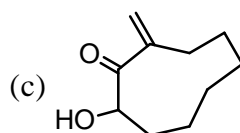
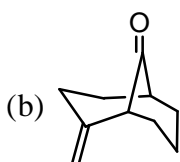
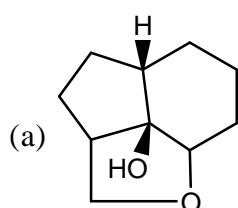
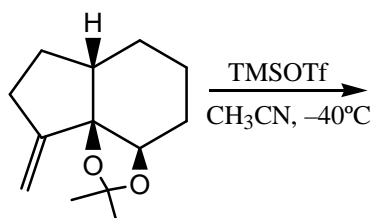
98. The major product formed in the following reaction sequence is



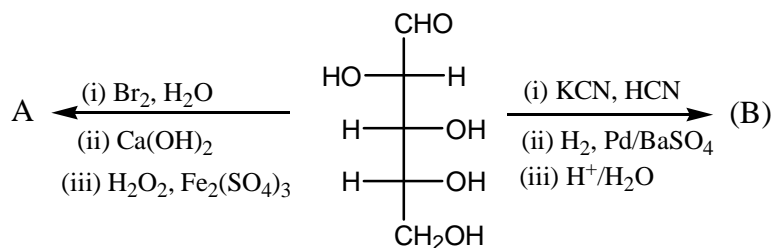
99. The major products A and B in the following reaction sequence are



100. The major product formed in the following reaction is

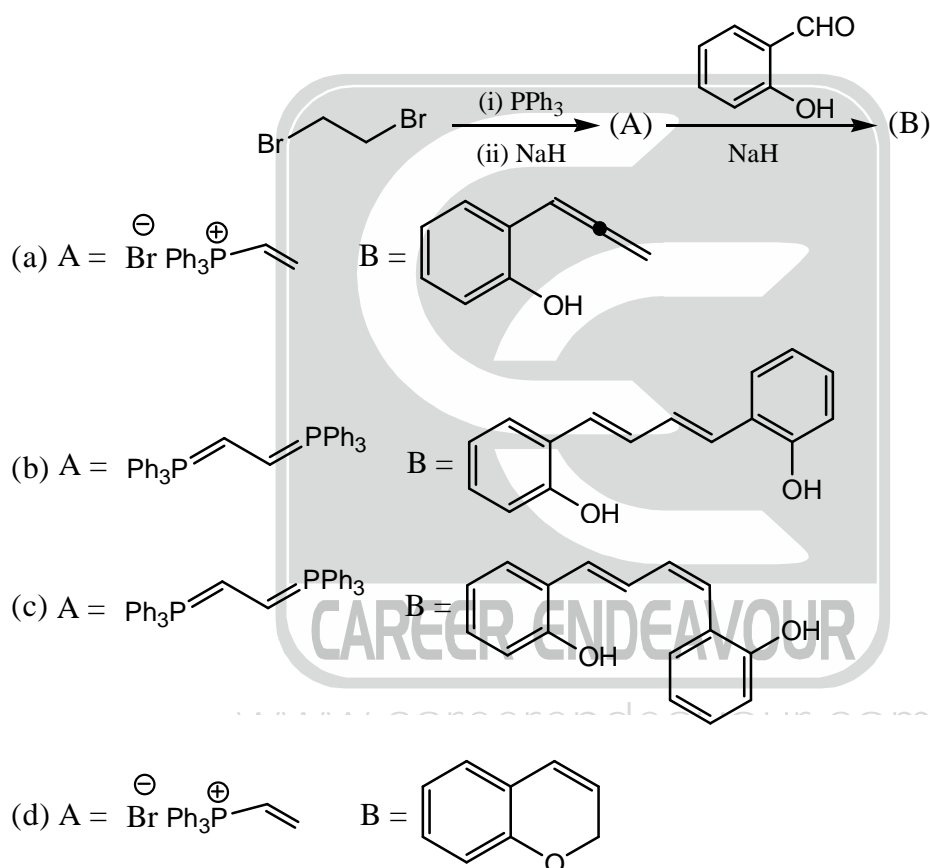


101. The major products A and B in the following reaction sequences are

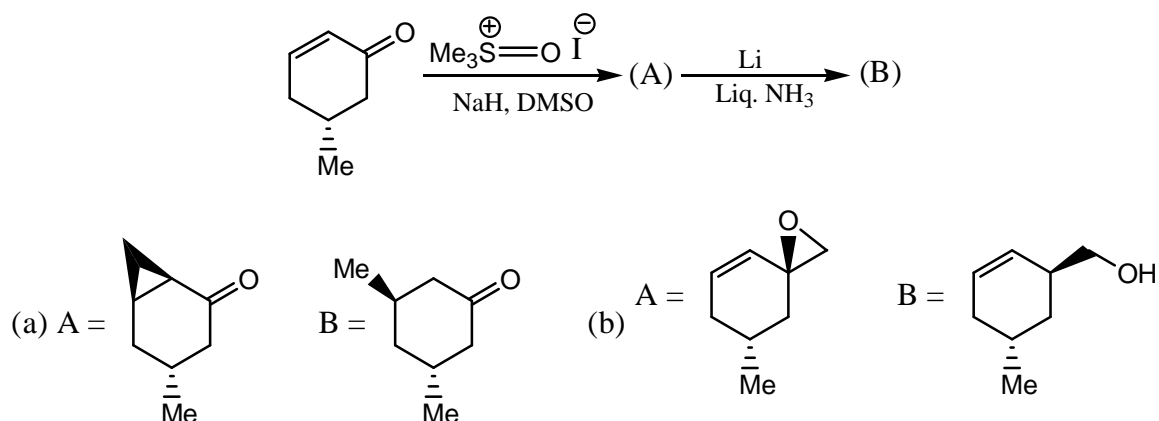


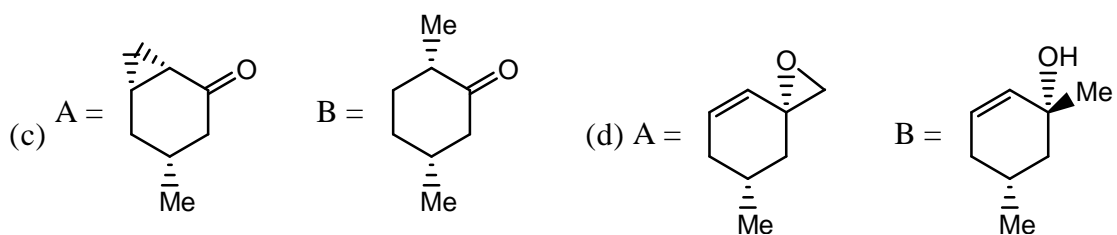
- (a) A = D-threose; B = D-glucose  
 (b) A = D-erythrose; B = D-glucose + D-mannose  
 (c) A = D-threose; B = D-glucose + D-mannose  
 (d) A = D-tartaric acid; B = D-glucose

102. The major products A and B in the following reaction sequence are

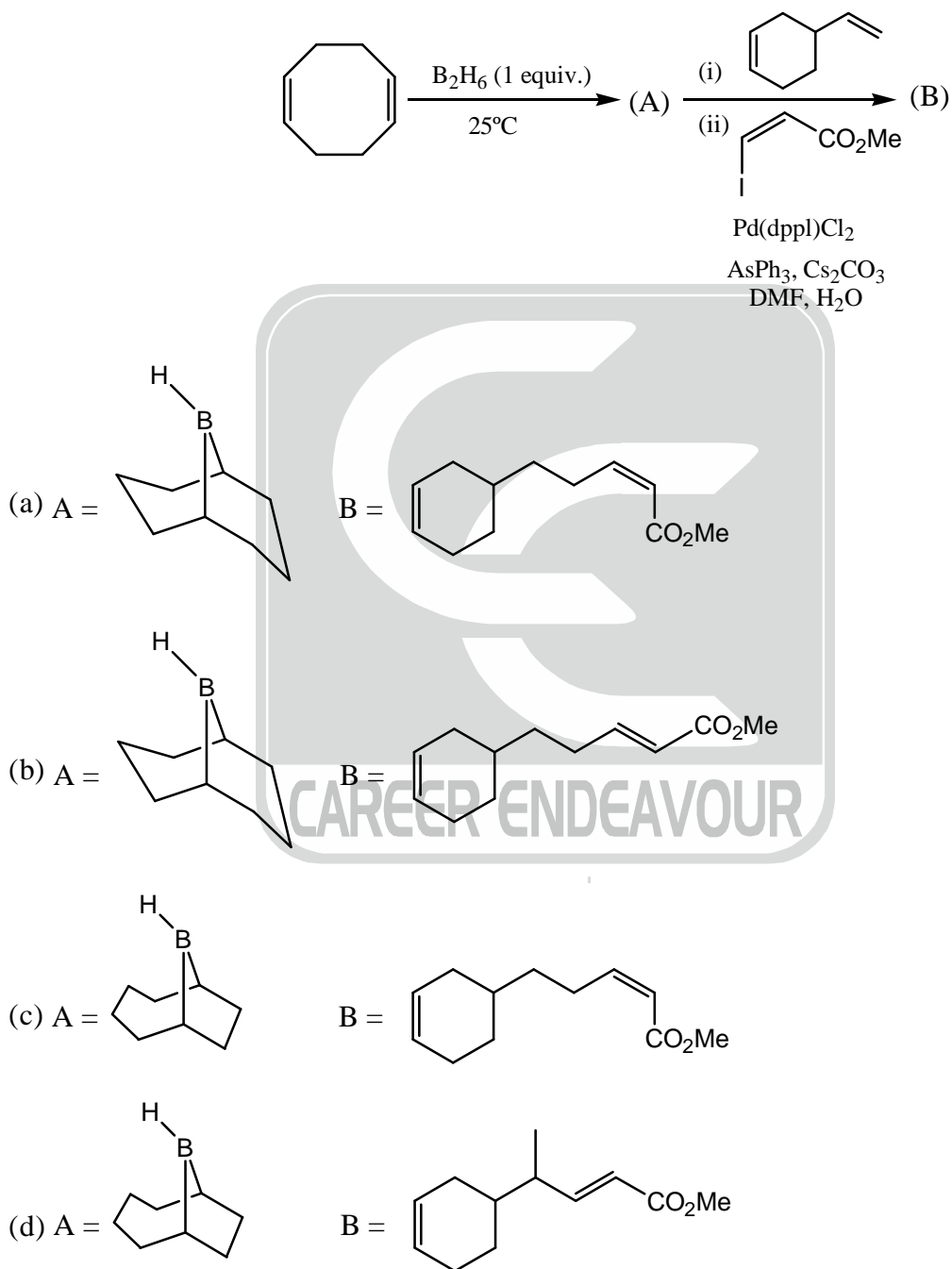


103. The major products A and B in the following reaction sequence are



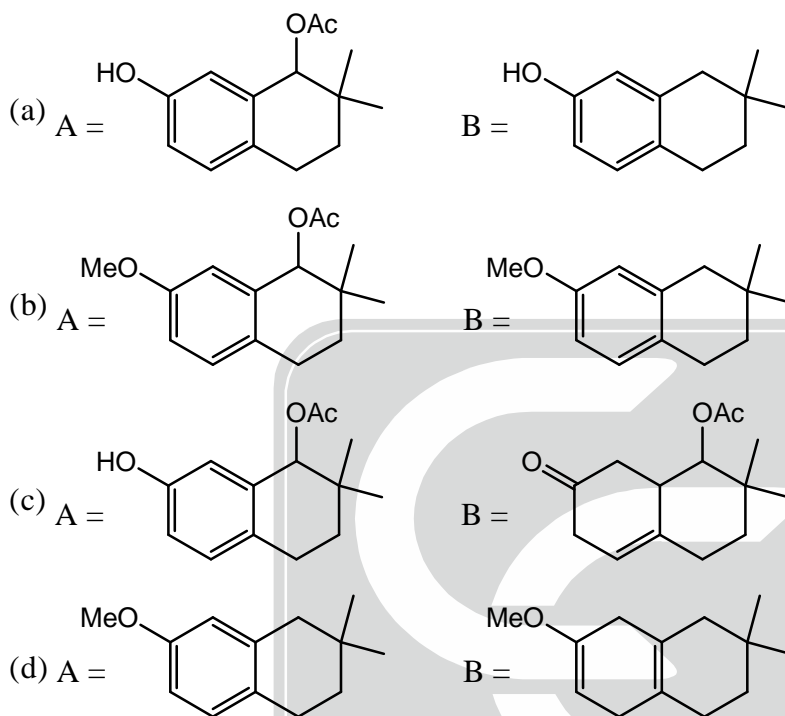
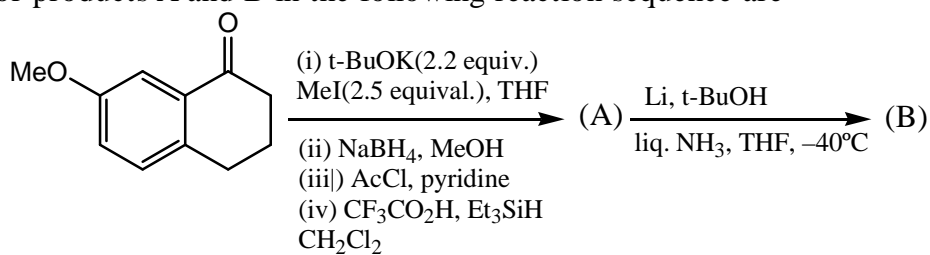


104. The major products A and B in the following reactions sequence are

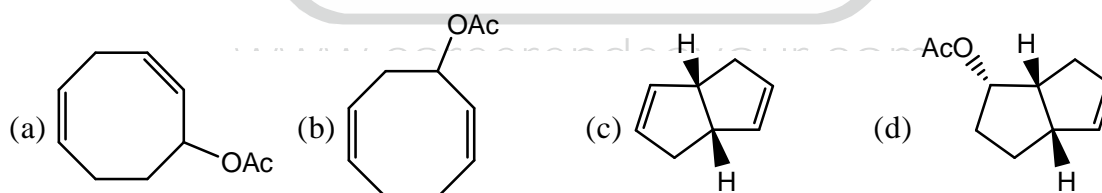
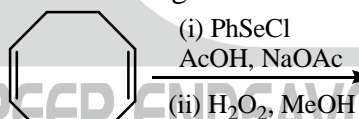




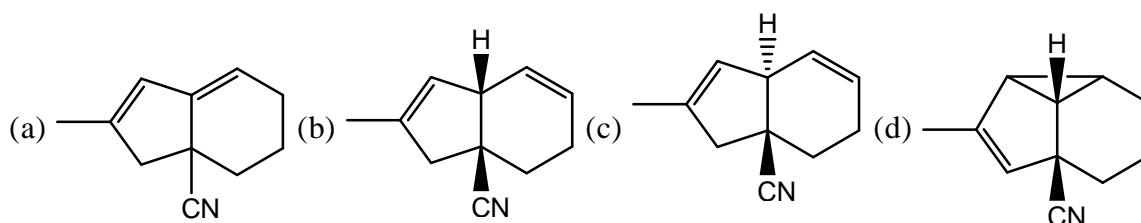
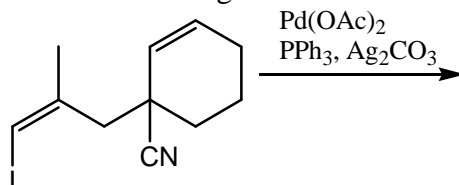
105. The major products A and B in the following reaction sequence are



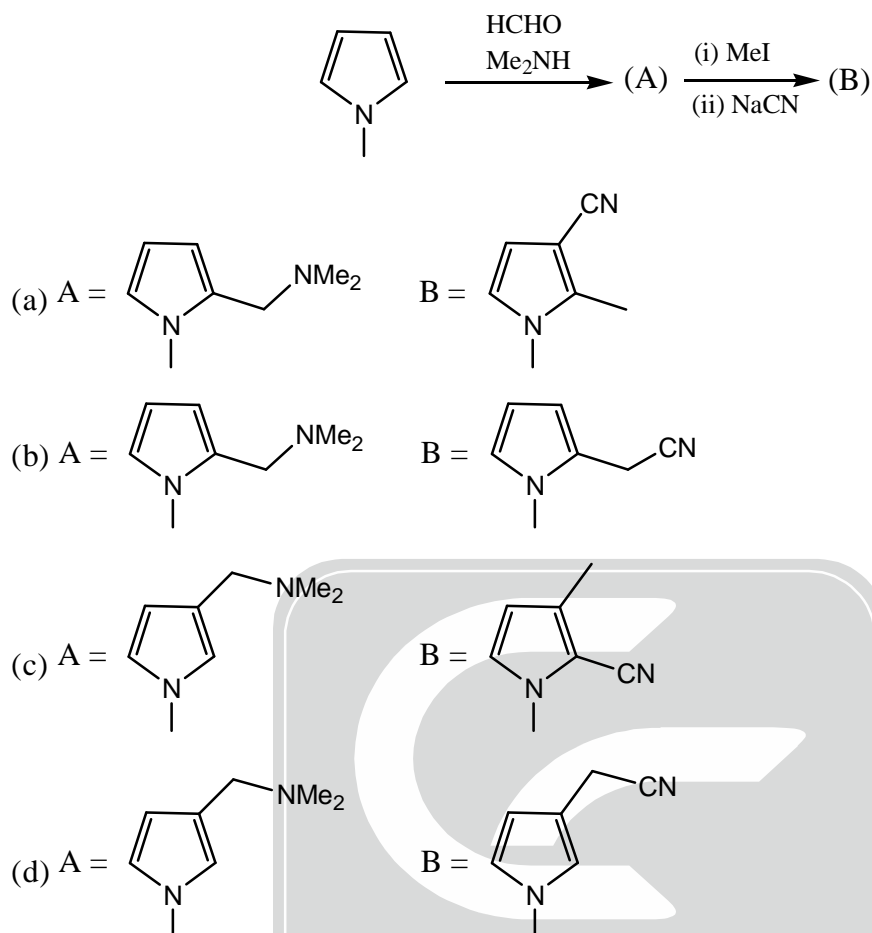
106. The major product formed in the following reaction is



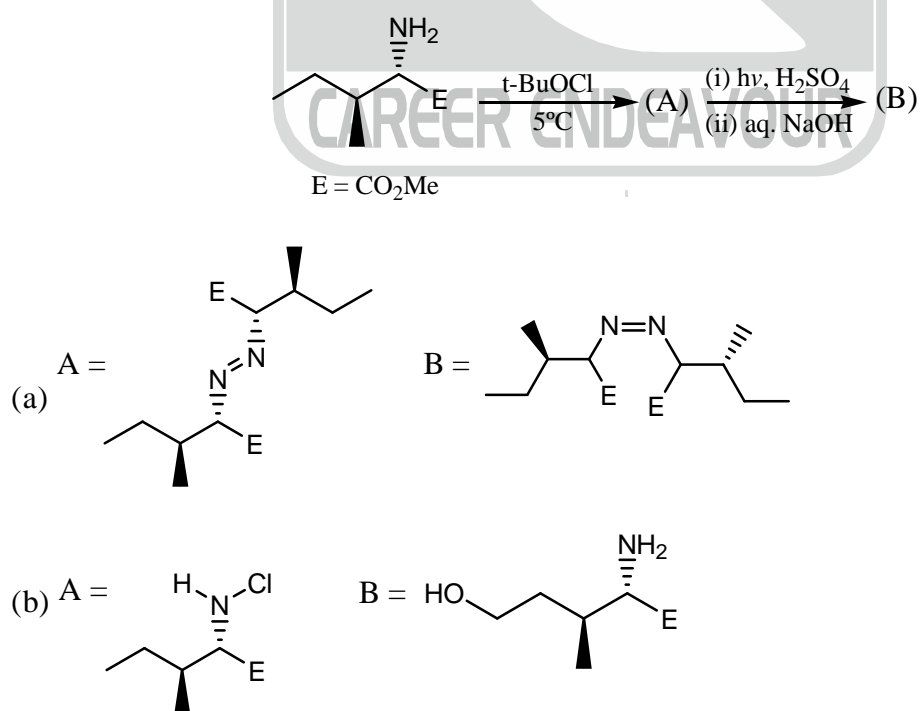
107. The major product formed in the following reaction is

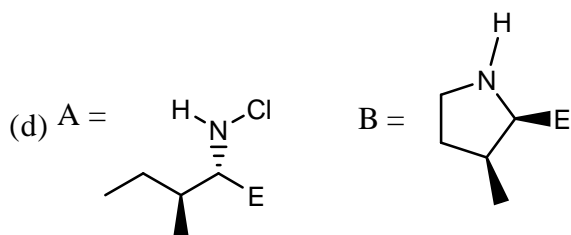
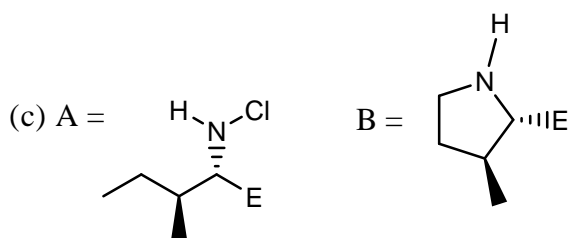


108. The major products A and B in the following reaction sequence are

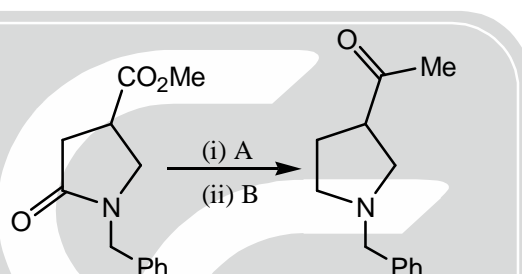


109. The major products A and B in the following reaction sequence are



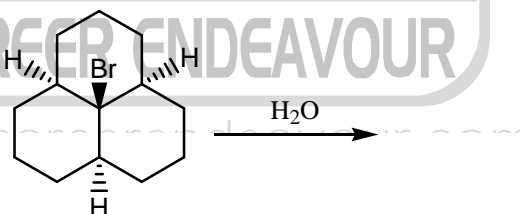


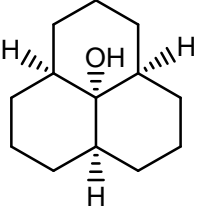
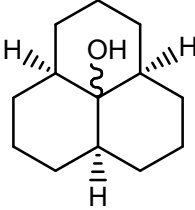
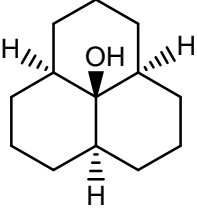
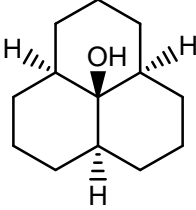
110. The correct reagent combination to effect the following transformation is



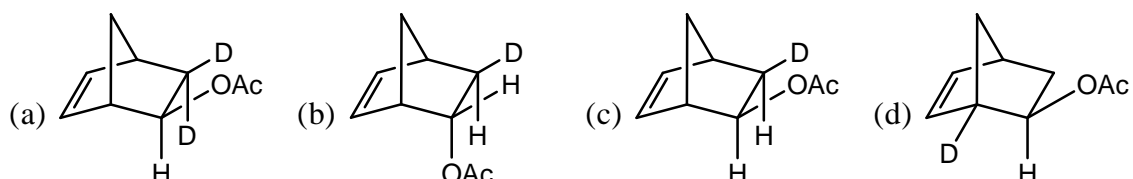
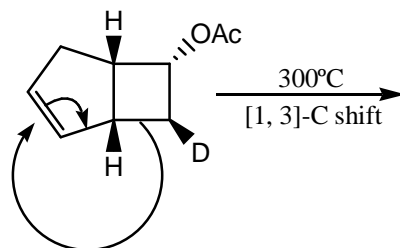
- (a) A =  $\text{NaBH}_4$ ,  $\text{BF}_3 \cdot \text{OEt}_2$ ; B =  $\text{MeMgBr}$  (2.5 equiv.), THF then  $\text{H}_3\text{O}^+$   
 (b) A =  $\text{BH}_3 \cdot \text{THF}$ ; B =  $\text{MeLi}$  (2.5 equiv.), THF then  $\text{H}_3\text{O}^+$   
 (c) A =  $\text{BH}_3 \cdot \text{THF}$ ; B = (i) aq.  $\text{NaOH}$  then  $\text{H}_3\text{O}^+$ , (ii)  $\text{MeLi}$  (2.5 equiv.), THF then  $\text{H}_3\text{O}^+$   
 (d) A = (i)  $\text{Me}_3\text{Al}$ ,  $\text{MeNHOMe}$ , (ii)  $\text{MeMgBr}$ , THF then  $\text{H}_3\text{O}^+$ ; B =  $\text{LiAlH}_4$ , THF

111. The mechanism and the product formed in the following reaction, respectively, are

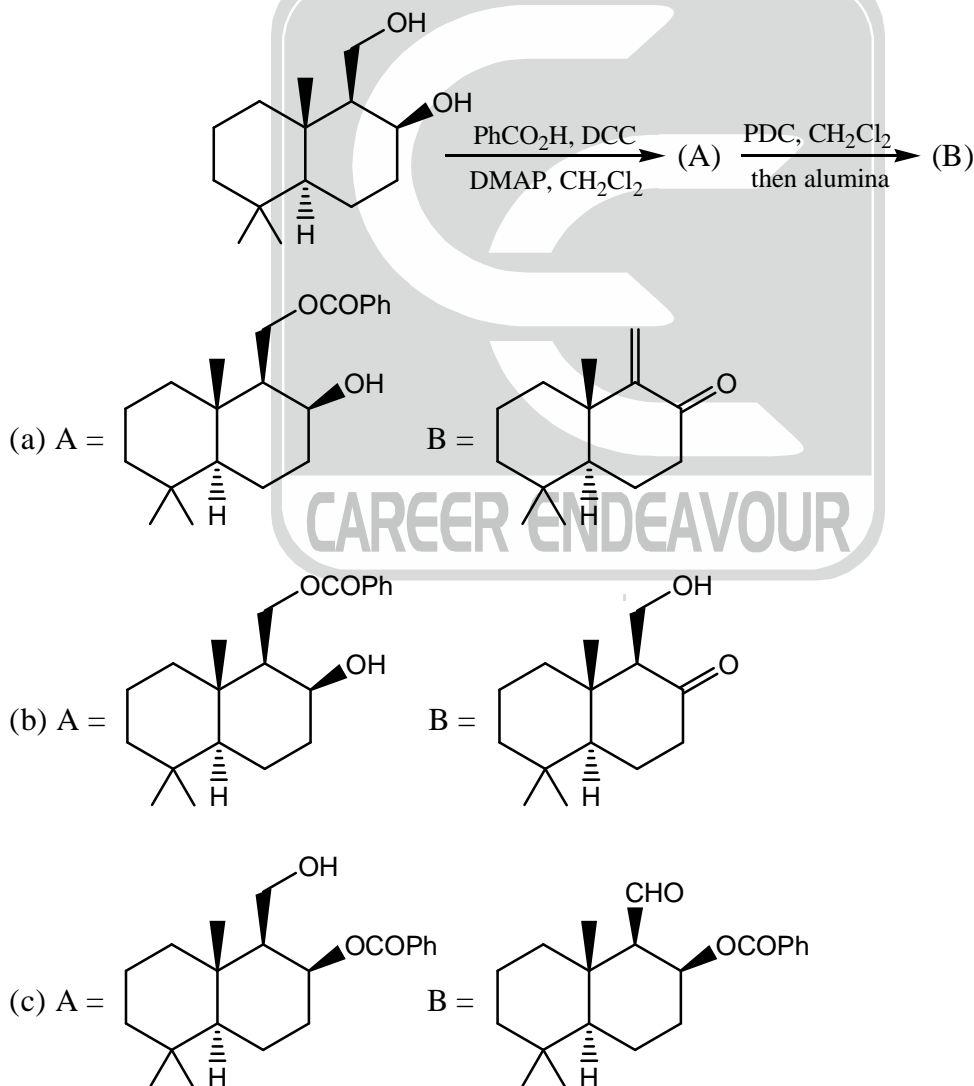


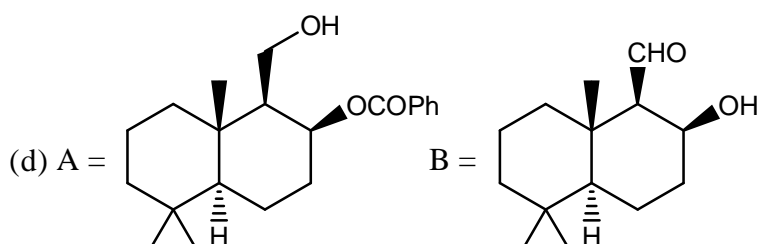
- (a)  $\text{S}_{\text{N}}2$  
- (b)  $\text{S}_{\text{N}}1$  
- (c)  $\text{S}_{\text{N}}2$  
- (d)  $\text{S}_{\text{N}}1$  

112. A concerted [1, 3]-sigmatropic rearrangement took place in the reaction shown below. The structure of the resulting product is

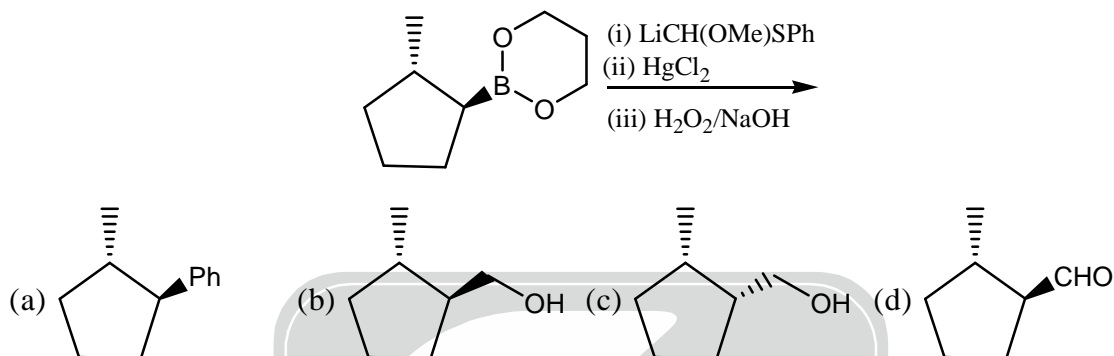


113. The major products A and B in the following reaction sequence are

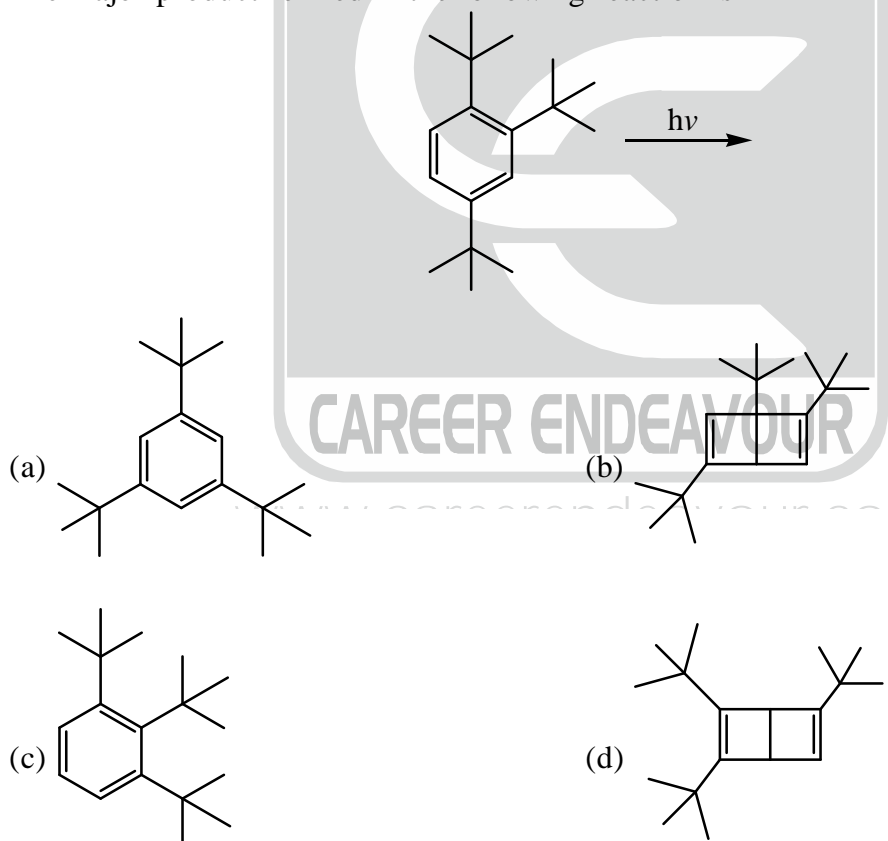




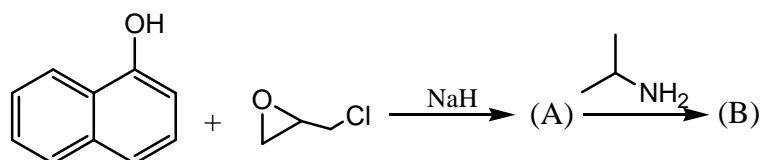
114. The major product formed in the following reaction sequence is

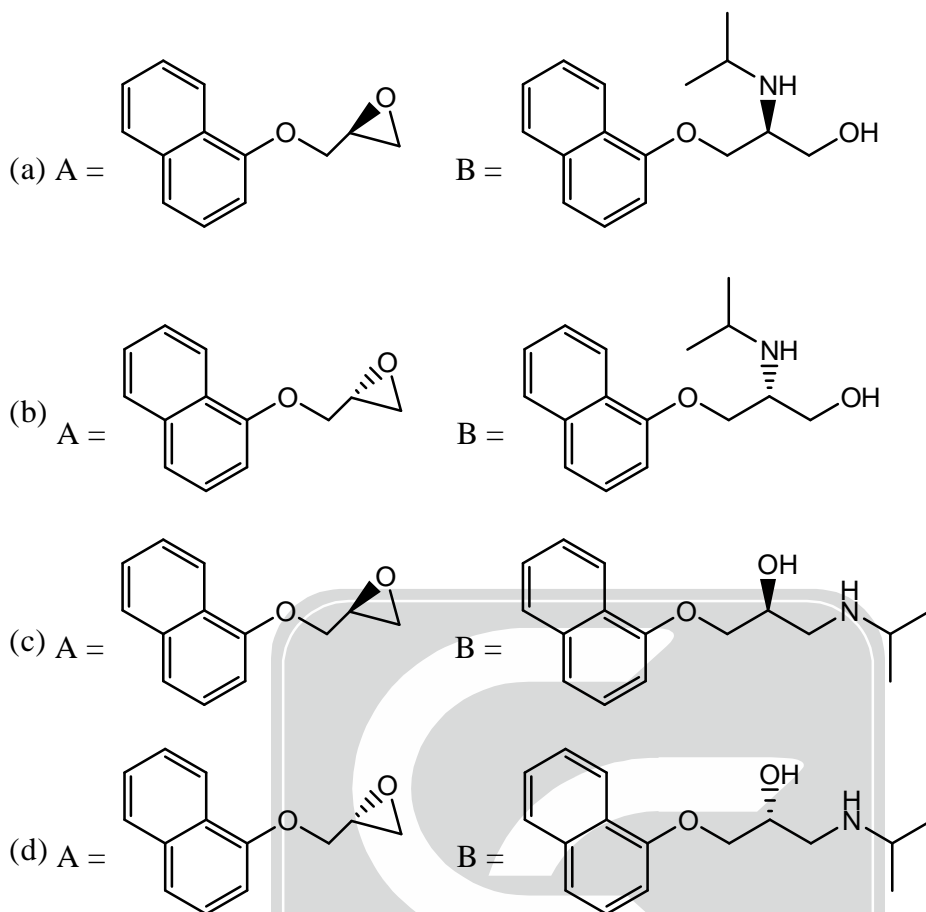


115. The major product formed in the following reaction is

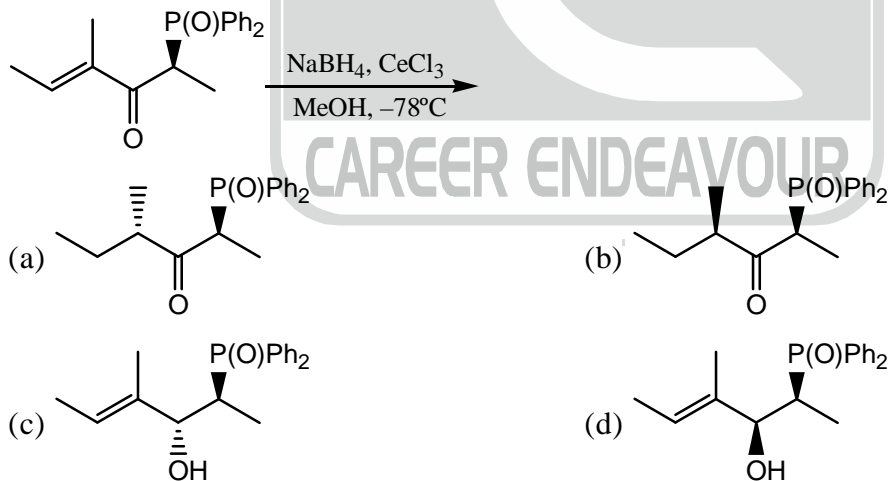


116. The major products A and B in the following reaction sequence are

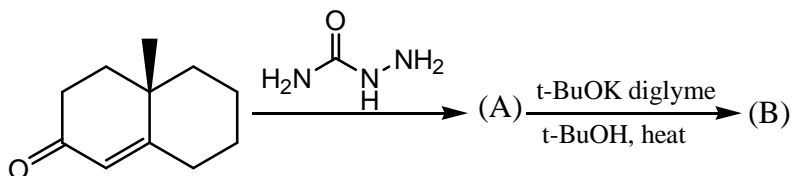


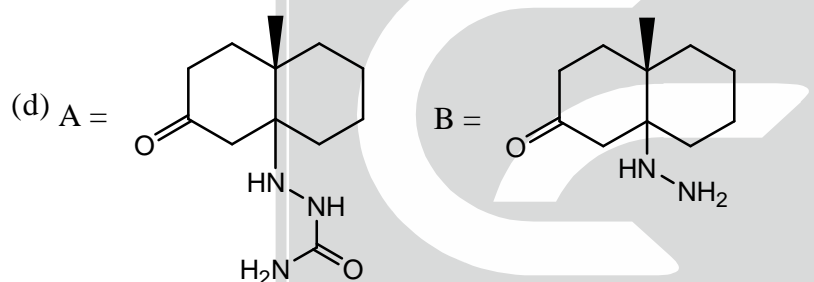
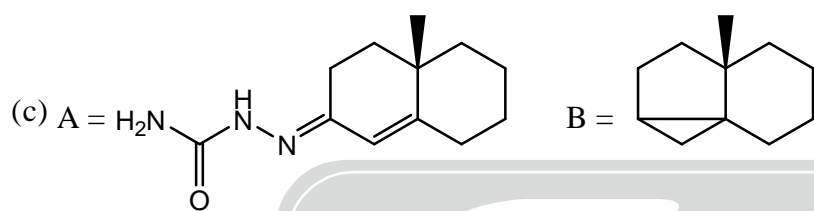
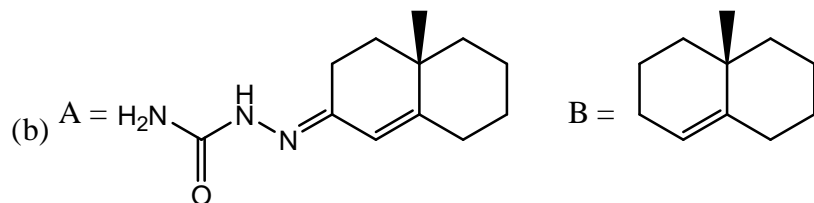
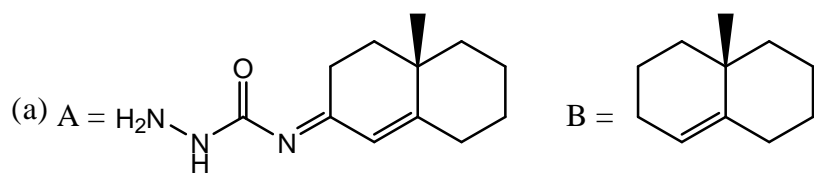


117. The major product of the following reaction is

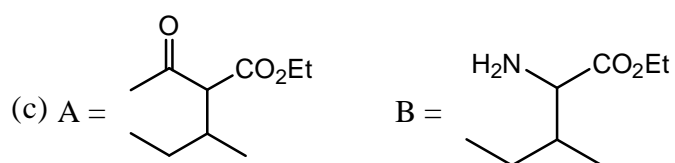
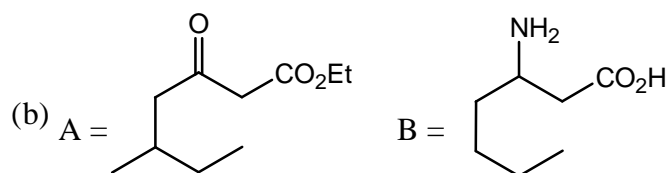
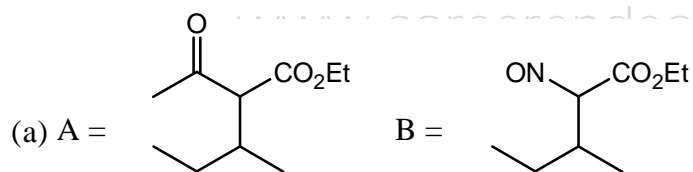
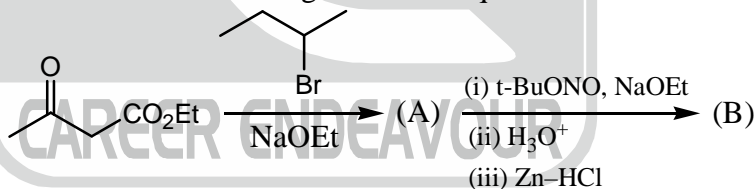


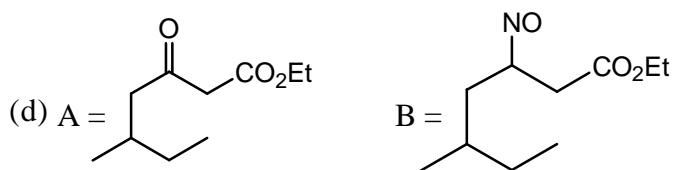
118. The major product A and B in the following reaction sequence are



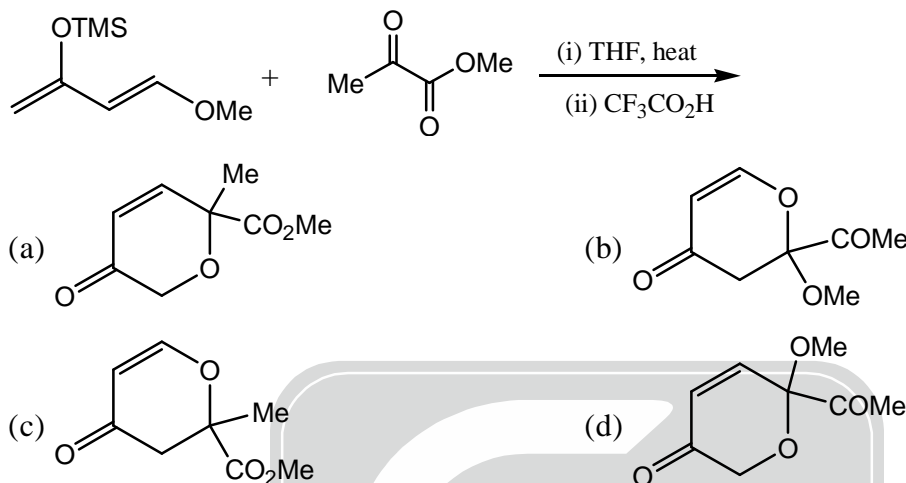


119. The major products A and B in the following reaction sequence are





120. The major product of the following reaction is



121. According to the transition state theory, one of the vibrations in the activated complex is a loose vibration. The partition function for this loose vibration is equal to ( $k_B$  is the Boltzmann's constant and  $h$  is the Planck's constant)

(a)  $\frac{k_B T}{h}$  (b)  $\frac{h\nu}{k_B T}$  (c)  $k_B T$  (d)  $\frac{k_B T}{h\nu}$

122. Possible term symbol(s) of the excited states of Na atom with the electronic configuration  $[1s^2 2s^2 2p^6 3p^1]$  is/are

(a)  $^2S_{1/2}$  (b)  $^2P_{3/2}$  and  $^2P_{1/2}$  (c)  $^1S_0$  and  $^1P_1$  (d)  $^3P_0$  and  $^3P_1$

123. For a simple cubic crystal, X-ray diffraction shows intense reflections for angles  $\theta_1$  and  $\theta_2$

which are assigned to  $[1\ 0\ 1]$  and  $[1\ 1\ 1]$  planes, respectively. The ratio  $\frac{\sin \theta_1}{\sin \theta_2}$  is

(a) 1.5 (b) 1.22 (c) 0.82 (d) 0.67

124. Stability of lyophobic dispersions is determined by

- (a) inter-particle electric double layer repulsion and intra-particle van der waals attraction  
 (b) inter-particle electric double layer attraction and intra-particle van der waals repulsion  
 (c) inter-particle excluded volume repulsion and intra-particle van der waals attraction  
 (d) inter-particle excluded volume attraction and intra-particle van der waals repulsion.

125. A certain 2-level system has stationary state energies  $E_1$  and  $E_2$  ( $E_1 < E_2$ ) with normalized wave functions  $\varphi_1$  and  $\varphi_2$  respectively. In the presence of a perturbation  $V$ , the second-order correction to the energy for the first state ( $\varphi_1$ ) will be

(a)  $\frac{\langle \varphi_1 | V | \varphi_2 \rangle}{E_1 - E_2}$  (b)  $\frac{\langle \varphi_1 | V | \varphi_2 \rangle}{E_2 - E_1}$  (c)  $\frac{|\langle \varphi_1 | V | \varphi_2 \rangle|^2}{E_1 - E_2}$  (d)  $\frac{|\langle \varphi_1 | V | \varphi_2 \rangle|^2}{(E_1 - E_2)^2}$



126. The  $^1\text{H}$  NMR frequency at 1.0 T is 42.4 MHz. If the gyromagnetic ratios of  $^1\text{H}$  and  $^{13}\text{C}$  are  $27 \times 10^7$  and  $6.75 \times 10^7 \text{ T}^{-1}\text{S}^{-1}$ , respectively, what will be the  $^{13}\text{C}$  frequency at 1.0 T?  
 (a) 10.6 MHz (b) 169.9 MHz (c) 42.6 MHz (d) 21.3 MHz
127. 10 mL aliquots of a mixture of HCl and  $\text{HNO}_3$  are titrated conductometrically using a 0.1M NaOH and a 0.1M  $\text{AgNO}_3$  separately. The titre volumes are  $V_1$  and  $V_2$  mL, respectively. The concentration of  $\text{HNO}_3$  in the mixture is obtained from the combination.  
 (a)  $V_1 - V_2$  (b)  $2V_1 - V_2$  (c)  $V_2 - V_1$  (d)  $2V_2 - V_1$
128. Given that  $E^0(\text{Cl}_2 / \text{Cl}^-) = 1.35 \text{ V}$  and  $K_{sp}(\text{AgCl}) = 10^{-10}$  at  $25^\circ\text{C}$ ,  $E^0$  corresponding to the electrode reaction  

$$\frac{1}{2}\text{Cl}_2(\text{g}) + \text{Ag}^+(\text{soln.}) + e^- \rightarrow \text{AgCl}(\text{s})$$
 is  $\left[ \frac{2.303RT}{F} = 0.06\text{V} \right]$   
 (a) 0.75V (b) 1.05V (c) 1.65V (d) 1.95V
129. The standard EMF of the cell  $\text{Pt}, \text{H}_2(\text{g}) | \text{HCl}(\text{soln.}) | \text{AgCl}(\text{s}), \text{Ag}(\text{s})$   
 (a) increases with T (b) decreases with T  
 (c) remains unchanged with T (d) decreases with [HCl]
130. The molecule with the smallest rotational constant (in the microwave spectrum) among the following is  
 (a)  $\text{N} \equiv \text{CH}$  (b)  $\text{HC} \equiv \text{CCl}$  (c)  $\text{CCl} \equiv \text{CF}$  (d)  $\text{B} \equiv \text{CCl}$
131. The spectroscopic technique that can distinguish unambiguously between trans-1, 2-dichloroethylene and cis-1, 2-dichloroethylene without any numerical calculation is  
 (a) microwave spectroscopy (b) UV-visible spectroscopy  
 (c) X-ray photoelectron spectroscopy (d)  $\gamma$ -ray spectroscopy
132. The ground state electronic configuration of  $\text{C}_2$  using all electron is  
 (a)  $\sigma_{1s}^2 \sigma_{1s}^{*2} \sigma_{2s}^2 \sigma_{2s}^{*2} \sigma_{2p}^2 \pi_{2p}^2$  (b)  $\sigma_{1s}^2 \sigma_{1s}^{*2} \sigma_{2s}^2 \sigma_{2s}^{*2} \sigma_{2p}^2 \sigma_{2p}^{*2}$   
 (c)  $\sigma_{1s}^2 \sigma_{1s}^{*2} \sigma_{2s}^2 \sigma_{2s}^{*2} \pi_{2p}^2 \sigma_{2p}^1 \sigma_{2p}^{*1}$  (d)  $\sigma_{1s}^2 \sigma_{1s}^{*2} \sigma_{2s}^2 \sigma_{2s}^{*2} \pi_{2p}^4$
133.  $v_{\max}$  and  $K_m$  for an enzyme catalyzed reaction are  $2.0 \times 10^{-3} \text{ M s}^{-1}$  and  $1.0 \times 10^{-6} \text{ M}$ , respectively. The rate of the reaction when the substrate concentration is  $1.0 \times 10^{-6} \text{ M}$  is  
 (a)  $3.0 \times 10^{-3} \text{ s}^{-1}$  (b)  $1.0 \times 10^{-3} \text{ s}^{-1}$  (c)  $2.0 \times 10^{-3} \text{ s}^{-1}$  (d)  $0.5 \text{ s}^{-1}$
134. The first order rate constant for a unimolecular gas phase reaction  $A \rightarrow$  products that follows Lindemann mechanism is  $2.0 \text{ s}^{-1}$  at  $p_A = 1 \text{ atm}$  and  $4.0 \text{ s}^{-1}$  at  $p_A = 2 \text{ atm}$ . The rate constant for the activation step is  
 (a)  $1.0 \text{ atm}^{-1} \text{ s}^{-1}$  (b)  $2.0 \text{ atm}^{-1} \text{ s}^{-1}$  (c)  $4.0 \text{ atm}^{-1} \text{ s}^{-1}$  (d)  $8.0 \text{ atm}^{-1} \text{ s}^{-1}$
135. The molecule diborane belongs to the symmetry point group  
 (a)  $C_{2v}$  (b)  $C_{2h}$  (c)  $D_{2d}$  (d)  $D_{2h}$
136. Though a constant shift of energy levels of a system changes the partition function, the properties that do not change are  
 (a) average energy, entropy and heat capacity  
 (b) average energy and entropy  
 (c) average energy and heat capacity  
 (d) entropy and heat capacity.



137. The vibrational frequency of a homo-nuclear diatomic molecule is  $\nu$ . The temperature at which the population of the first excited state will be half that of the ground state is given by  
 (a)  $h\nu \cdot \ln 2 / k_B$       (b)  $h\nu / (\ln 2 \cdot k_B)$       (c)  $\ln 2 / (h\nu \cdot k_B)$       (d)  $h\nu \cdot \log 2 / k_B$
138. The irreducible representations of  $C_{2h}$  are  $A_g, B_g, A_u$  and  $B_u$ . The Raman active modes of trans-1, 3-butadiene belong to the irreducible representations  
 (a)  $A_g$  and  $B_g$       (b)  $A_g$  and  $A_u$       (c)  $A_u$  and  $B_g$       (d)  $B_g$  and  $B_u$
139. The symmetry-allowed atomic transition among the following is  
 (a)  ${}^3F \rightarrow {}^1D$       (b)  ${}^3F \rightarrow {}^3D$       (c)  ${}^3F \rightarrow {}^1P$       (d)  ${}^3F \rightarrow {}^3P$
140. The average end-to-end distance of a random coil polymer  $10^6$  monomers (in units of segment length) is  
 (a)  $10^6$       (b)  $10^5$       (c)  $10^4$       (d)  $10^3$
141. A reversible expansion of 1.0 mol of an ideal gas is carried out from 1.0 L to 4.0 L under isothermal condition at 300K.  $\Delta G$  for this process is  
 (a)  $300R \cdot \ln 2$       (b)  $600R \cdot \ln 2$       (c)  $-600R \cdot \ln 2$       (d)  $-300R \cdot \ln 2$
142. The temperature-dependence of the vapour pressure of solid A can be represented by  $\log p = 10.0 - \frac{1800}{T}$ , and that of liquid A by  $\log p = 8.0 - \frac{1400}{T}$ . The temperature of the triple point of A is  
 (a) 200 K      (b) 300 K      (c) 400 K      (d) 500 K
143. The non-spontaneous process among the following is  
 (a) vapourisation of superheated water at  $105^\circ\text{C}$  and 1 atm pressure  
 (b) expansion of a gas into vacuum freezing  
 (c) freezing of supercooled water at  $-10^\circ\text{C}$  and 1 atm pressure  
 (d) freezing of water at  $0^\circ\text{C}$  and 1 atm pressure.
144. The radial part of a hydrogenic wave function is given as  $r(\alpha - r)e^{-\beta r}$  ( $\alpha, \beta$  are constants). This function is then identifiable as  
 (a) 2s      (b) 3p      (c) 4d      (d) 5f
145. A normalised state  $\phi$  is constructed as a linear combination of the ground state ( $\psi_0$ ) and the first excited state ( $\psi_1$ ) of some harmonic oscillator with energies  $1/2$  and  $3/2$  units, respectively. If the average energy of the state  $\phi$  is  $7/6$ , the probability of finding  $\psi_0$  in  $\phi$  will be  
 (a)  $1/2$       (b)  $1/3$       (c)  $1/4$       (d)  $1/5$