

Particle in a Box

Particle in a Box

Particle in One Dimensional Box:

In this problem a particle of mass is placed in a one dimensional box of length l particle is free to move. Box have infinite walls.

It is assumed that the potential energy of particle is zero every where inside the Box i.e.

$$V(x) = 0.$$

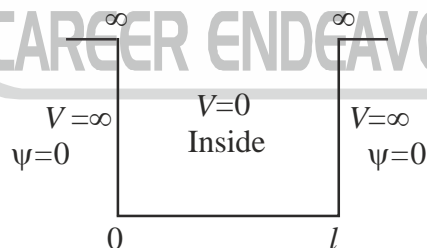
The time-independent one-dimension Schrodinger equation will be

$$\frac{d^2\psi}{dx^2} + \frac{8\pi^2m}{h^2}(E - V)\psi = 0 \quad \dots(1)$$

Outside the box, equation (1) takes the form.

$$\frac{d^2\psi}{dx^2} + \frac{8\pi^2m}{h^2}(E - \infty)\psi = 0$$

Neglecting E is comparison to ∞ , we have.



$$\frac{d^2\psi}{dx^2} = \infty \psi \text{ or } \psi = \frac{1}{\infty} \frac{d^2\psi}{dx^2}$$

That is $\psi = 0$ outside the box. This means that the particle cannot exist outside the region $0 < x < l$.

Within the box, the schrodinger equation for the motion of the particle takes the form.

$$\frac{d^2\psi}{dx^2} + \frac{8\pi^2m}{h^2}E\psi = 0$$

$$\frac{d^2\psi}{dx^2} + \alpha^2\psi = 0 \quad \dots(2)$$

$$\text{where, } \alpha^2 = \frac{8\pi^2mE}{h^2} \quad \dots(3)$$

A general solution of equation (2) is given by.

$$\psi = A \sin(\alpha x) + B \cos(\alpha x) \quad \dots(4)$$

Where A and B are constant.

Boundary conditions :

(1) $\psi(x) = 0$ at $x = 0$

$$0 = A \sin(\alpha \cdot 0) + B \cos(\alpha \cdot 0)$$

The above expression will be true only when $B = 0$, thus the wavefunction as given by equation (4) becomes.

$$\psi = A \sin(\alpha x) \quad \dots(5)$$

(2) $\psi(x) = 0$ at $x = l$, then

$$0 = A \sin(\alpha l)$$

The above expression will be true only where αl is an integral multiple of π that is,

$$\alpha l = n \pi \quad \dots(6)$$

When n can have only integral values of 1, 2, 3, and is known as quantum number. A value of $n = 0$ is eliminated since it leads to $\alpha = 0$ i.e. $\psi(x) = 0$ every where within the box. Substituting α from equation (6) in equation (5) we get.

$$\psi = A \sin\left(\frac{n \pi x}{l}\right) \quad \dots(7)$$

Now from equation (3) we have.

$$\alpha^2 = \frac{8 \pi^2 m E}{h^2} \Rightarrow E = \frac{\alpha^2 h^2}{8 \pi^2 m} = \frac{n^2 h^2}{8 m l^2} \quad \dots(8)$$

Energy of a particle in 1-D box is quantized.

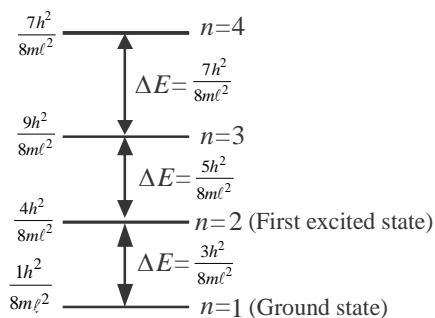
So energy difference between the two successive energy levels will be

$$\begin{aligned} \Delta E &= E_{n+1} - E_n \\ \Rightarrow \Delta E &= \frac{(n+1)^2 h^2}{8 m l^2} - \frac{n^2 h^2}{8 m l^2} = \frac{[(n+1)^2 - n^2] h^2}{8 m l^2} = \frac{(2n+1) h^2}{8 m l^2} \end{aligned}$$

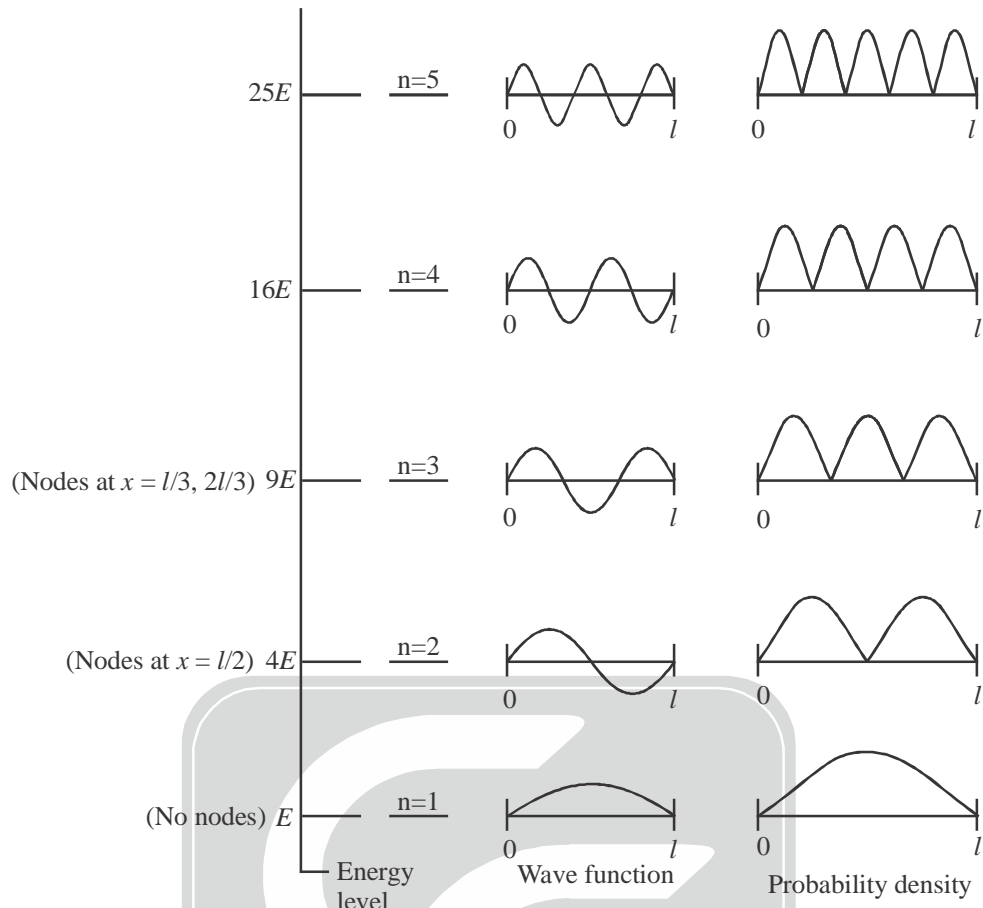
Zero point energy (Ground state energy):

$$E_{n=1} = \frac{h^2}{8 m l^2}$$

Energy Level Diagram in 1-D box:



Graph of Wave Functions and Probability :

**Particle in a symmetric 1-D box from $-l$ to $+l$:**

Consider a free particle is confined to move in 1D box of length $-l$ to l .

$$\begin{aligned} V &= 0 && \text{inside the box} \\ V &= \infty && \text{else where} \end{aligned}$$

Schrodinger wave equation for 1-D box is

$$\frac{d^2\psi}{dx^2} + \frac{8\pi^2m}{h^2}(E - V)\psi = 0$$

Or,
$$\frac{d^2\psi}{dx^2} + \frac{8\pi^2m}{h^2}E\psi = 0 \quad (\because V = 0)$$

Or,
$$\frac{d^2\psi}{dx^2} + k^2\psi = 0$$

$\therefore \psi = A \sin kx + B \cos kx \quad \dots (1)$

Boundary conditions:

(i) For first $\psi = 0$, $x = -l$

$$0 = -A \sin kl + B \cos kl \quad \dots (2) \quad \left[\begin{array}{l} \because \sin(-\theta) = -\sin \theta \\ \text{and } \cos(-\theta) = +\cos \theta \end{array} \right]$$

(ii) $\psi = 0$, $x = +l$

$$0 = A \sin kl + B \cos kl \quad \dots (3)$$

From (ii) and (iii)

(2) + (3) $2B \cos kl = 0 \Rightarrow B \cos kl = 0$ i.e. $B = 0$ or $\cos kl = 0$

(2) - (3) $-2A \sin kl = 0 \Rightarrow A \sin kl = 0$ i.e. $A = 0$ or $\sin kl = 0$

Possible solutions:

$$(a) A = 0, \cos k\ell = 0 \Rightarrow k\ell = n\frac{\pi}{2} \Rightarrow k = \frac{n\pi}{2\ell} \quad (n = 1, 3, 5, \dots)$$

$$\text{So, } \psi(x) = B \cos\left(\frac{n\pi x}{2\ell}\right) \quad (n = 1, 3, 5, \dots)$$

$$(b) B = 0, \sin k\ell = 0 \Rightarrow k\ell = n\frac{\pi}{2} \Rightarrow k = \frac{n\pi}{2\ell} \quad (n = 2, 4, 6, \dots)$$

$$\text{So, } \psi(x) = A \sin\left(\frac{n\pi x}{2\ell}\right) \quad (n = 2, 4, 6, \dots)$$

For normalised function, $\int_{-\ell}^{\ell} \psi^2 dx = 1$

$$\Rightarrow \int_{-\ell}^{+\ell} A^2 \sin^2 \frac{n\pi x}{2\ell} dx = 1 \quad \left[\text{Let } \frac{n\pi}{2\ell} = z \right]$$

$$\Rightarrow A^2 \int_{-\ell}^{+\ell} \left[\frac{1 - \cos 2zx}{2} \right] dx = 1$$

$$\Rightarrow A^2 \left[\int_{-\ell}^{+\ell} \frac{\ell}{2} dx - \frac{1}{2} \int_{-\ell}^{+\ell} \cos 2zx \right] = 1$$

$$\Rightarrow A^2 \int_{-\ell}^{+\ell} \frac{1}{2} dx = 1 \quad \left[\frac{1}{2} \int_{-\ell}^{+\ell} \cos 2zx = 0 \right]$$

$$\Rightarrow A^2 \times \frac{1}{2} [x]_{-\ell}^{+\ell} = 1 \Rightarrow A^2 \times \frac{1}{2} \times [2\ell] = 1 \Rightarrow A^2 = \frac{1}{\ell} \Rightarrow A = \sqrt{\frac{1}{\ell}}$$

Similarly for, $\int_{-\ell}^{+\ell} B^2 \cos^2 \frac{n\pi x}{2\ell} dx = 1 \Rightarrow B = \sqrt{\frac{1}{\ell}}$

Therefore, $\psi_{\text{normalized}} = \frac{1}{\sqrt{\ell}} \sin \frac{n\pi x}{2\ell} \quad (n = 2, 4, 6, \dots)$

$$\psi_{\text{normalized}} = \frac{1}{\sqrt{\ell}} \cos \frac{n\pi x}{2\ell} \quad (n = 1, 3, 5, \dots)$$

And for these function energy is $E = \frac{n^2 h^2}{32m\ell^2}$

SOLVED PROBLEMS

1. A particle in a 1-D box of length L has eigenstates $\psi_n(x)$ with energies E_n . Consider two initial states of the particle at time $t = 0$: case (1) $\psi(x, t = 0) = \psi_n$ (arbitrary n), and case (2) $\psi(x, t = 0) = \psi_n + \psi_m$ (arbitrary n and m ; $n \neq m$). The probability to find the particle at a specific position within the box:
- Varies with time for case 1 but not for case 2
 - Is time dependent for both cases
 - Is time independent for both cases
 - Varies with time for case 2 but not for case 1

Soln. Case (1): $\psi(x, t = 0) = \psi_n = \phi_n e^{-iE_n t/\hbar}$

Probability density = $\psi_n \psi_n^*$

$$= \phi_n e^{-iE_n t/\hbar} \cdot \phi_n^* e^{iE_n t/\hbar}$$

$$= \phi_n \phi_n^* \text{ (Independent of time)}$$

Case (2): $\psi(x, t = 0) = \psi_n + \psi_m$

Probability density = $(\psi_n + \psi_m)(\psi_n + \psi_m)^*$

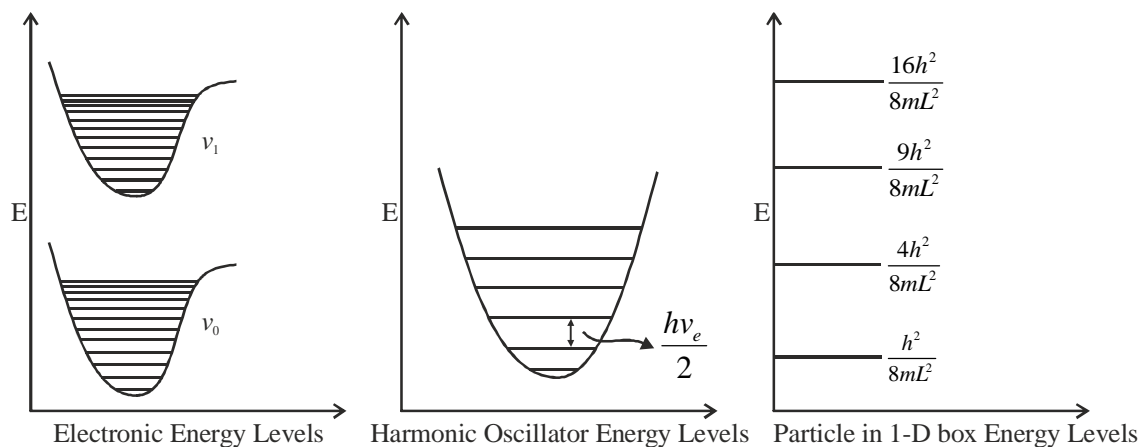
$$= (\phi_n e^{-iE_n t/\hbar} + \phi_m e^{-iE_m t/\hbar}) \cdot (\phi_n^* e^{iE_n t/\hbar} + \phi_m^* e^{iE_m t/\hbar})$$

$$= \phi_n \phi_n^* + \phi_n \phi_m^* e^{-it/\hbar(E_n - E_m)} + \phi_n \phi_n^* e^{-i\hbar t(E_m - E_n)} + \phi_m \phi_m^* \text{ (Time dependent)}$$

Correct option is (d)

2. Given three system, A, B and C what could be they if the spacing between the neighbouring energy levels in A decreases with increasing energy, while that for B is constant, and that for C increases with increasing energy?
- A = particle in a one-dimensional box, B = harmonic oscillator, C = electron in hydrogen atom
 - A = electron in hydrogen atom, B = harmonic oscillator, C = particle in a one-dimensional box
 - A = particle in a one-dimensional box, B = electron in hydrogen atom, C = harmonic oscillator
 - A = electron in hydrogen atom, B = particle in a one-dimensional box, C = harmonic oscillator

Soln.



Space between neighbouring energy level decrease because as vibrational quantum number increase ΔE value decrease for upper level in electronic transition

$$\Delta E = hv_e [1 - 2x_e(1 + v)]$$

Correct option is (b)

Space between neighbouring energy level remain constant because harmonic oscillator difference in energy between two levels is independent of vibrational quantum number

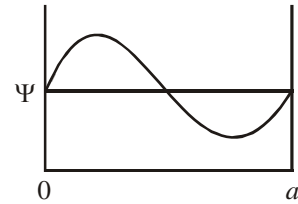
$$\Delta E = hv_e$$

Space between neighbouring energy level increase as principal quantum number value increase in 1-D box

$$\Delta E = \frac{(2n+1)h^2}{8mL^2}$$

3. Plot the graph of a wave function having energy $\frac{0.5h^2}{ma^2}$.

Soln. $\frac{n^2 h^2}{8m a^2} = \frac{0.5h^2}{m a^2} \Rightarrow n^2 = 4, \Rightarrow n = 2$



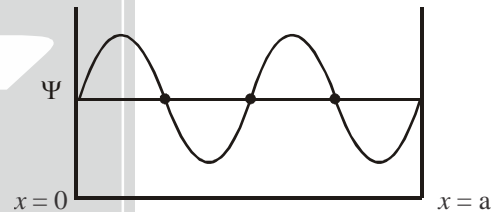
This corresponds to first excited state having 1 nodes at $x = \frac{a}{2}$

4. If an electron escaped in a 1-D box of length 1 Å having energy 608.4 eV, plot its graph.

Soln. $\frac{n^2 h^2}{8m l^2} = 608.4 \times 1.6 \times 10^{-19} \text{ Joule}$

$$\therefore n^2 = \frac{608.4 \times 1.6 \times 10^{-19} \times 8 \times 9.1 \times 10^{-31} \times (10^{-10})^2}{(6.62 \times 10^{-34})^2} = 16.17$$

$$\therefore n = \sqrt{16.17} \approx 4$$



5. Consider a ball of mass 1 g moving with a speed 1 cm s⁻¹ in a one dimensional box of edge length equal to 10 cm.

(1) Calculate its kinetic energy and the number n corresponding to this kinetic energy.

(2) If the ball is to be promoted to the next higher quantum level, then how much of energy is required?

Form the obtained value justify that the kinetic energy of a larger mass varies in a continuous manner and can be calculated from the classical mechanical laws of Newton.

Soln. (1) Kinetic energy of the ball = $\left(\frac{1}{2}\right)mv^2 = \left(\frac{1}{2}\right)(10^{-3} \text{ kg})(10^{-2} \text{ ms}^{-1})^2 = 0.5 \times 10^{-7} \text{ kg m}^2 \text{ s}^{-2} = 0.5 \times 10^{-7} \text{ J}$.

Since, $E_n = n^2 \left\{ \frac{h^2}{8l^2 m} \right\}$

Therefore, $n^2 = \frac{E_n}{(h^2 / 8l^2 m)} = \frac{E_n (8l^2 m)}{h^2} = \frac{(0.5 \times 10^{-7} \text{ J})(8)(10^{-1} \text{ m})^2 (10^{-3} \text{ kg})}{(6.626 \times 10^{-34} \text{ Js})^2} = 9.11 \times 10^{58}$

$$n = 3.02 \times 10^{29}$$

(2) Now, $\Delta E = E_{n+1} - E_n = (2n+1) \left(\frac{h^2}{8l^2 m} \right)$

$$= (2 \times 3.02 \times 10^{29} + 1) \left\{ \frac{(6.626 \times 10^{-34} \text{ Js})^2}{8 \times (10^{-1} \text{ m})^2 (10^{-2} \text{ kg})} \right\} = 3.32 \times 10^{-34} \text{ J}$$

6. An electron is confined in a 1-D box of length of 1\AA . If electron falls from first excited state to ground state, what energy it will emit?

Soln. Length of box, $\ell = 1\text{\AA} = 10^{-10}\text{ m}$

$$\text{Energy of 1}^{\text{st}} \text{ excited state, } E_1 = \frac{1^2 h^2}{8m\ell^2} = \frac{h^2}{8m\ell^2}$$

$$\text{Energy of 2}^{\text{nd}} \text{ excited state, } E_2 = \frac{2^2 h^2}{8m\ell^2} = \frac{4h^2}{8m\ell^2}$$

$$\therefore \Delta E = E_2 - E_1 = (4-1) \frac{h^2}{8m\ell^2} = (3 \times 37.6) eV = 112.8 eV$$

7. A ball of mass 1 gm confined to move in 1-D box of length 0.1 m with a velocity of 0.01 m/s. Calculate the n (principle quantum number). Is quantization is possible?

Soln. We know the energy of 1-D box = It's kinetic energy.

$$\therefore \frac{n^2 h^2}{8m\ell^2} = \frac{1}{2} mv^2 \quad \Rightarrow \quad n^2 = \frac{4m^2 v^2 \ell^2}{h^2} = \frac{4 \times (10^{-3})^2 \times (0.01)^2 \times (0.1)^2}{(6.627 \times 10^{-34})^2} = 9.13 \times 10^{57}$$

$$\therefore n \approx 9 \times 10^{28}$$

Quantum number n is very very large. It is not possible to calculate the difference between successive energy level. So, **it is not possible to observe quantization in the energy level.**

